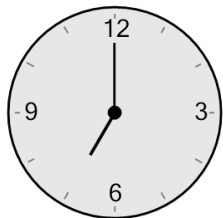


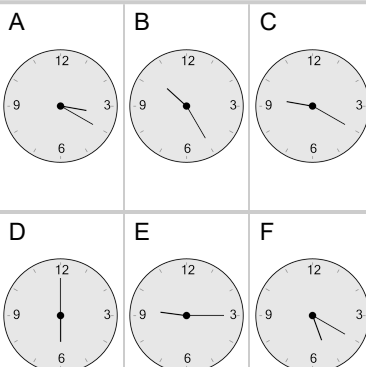


## Time - Elapsed Negative - Clock and Hours & Minutes to Clock - Full Hours

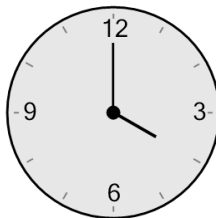
**1** What will the time be after the given change?



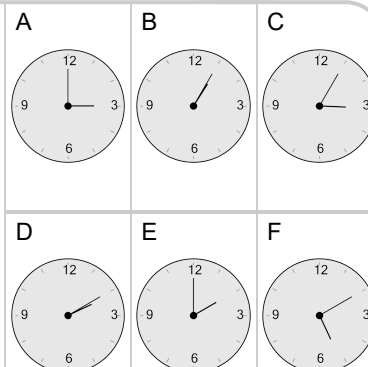
Subtract 1 hr



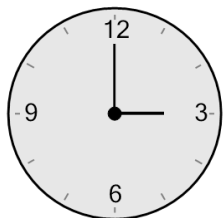
**2** What will the time be after the given change?



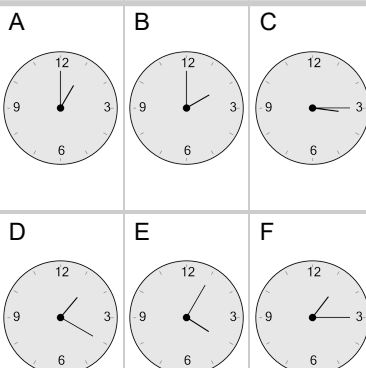
Subtract 1 hr



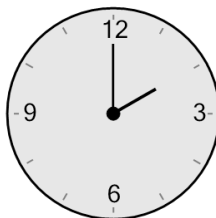
**3** What will the time be after the given change?



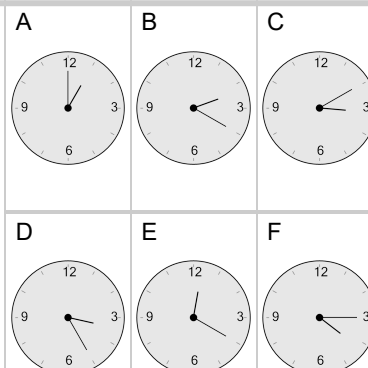
Subtract 1 hr



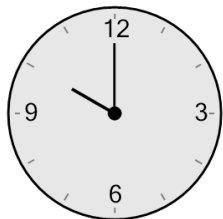
**4** What will the time be after the given change?



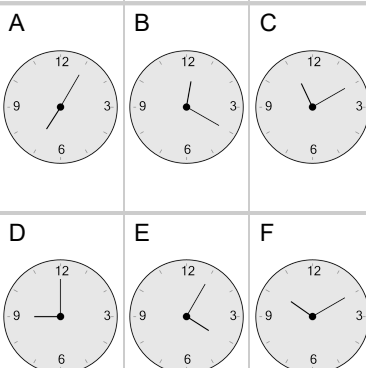
Subtract 1 hr



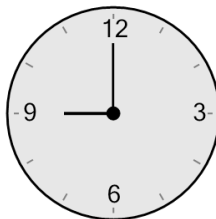
**5** What will the time be after the given change?



Subtract 1 hr



**6** What will the time be after the given change?



Subtract 1 hr

