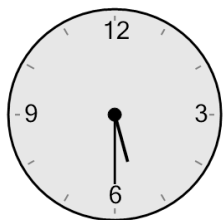


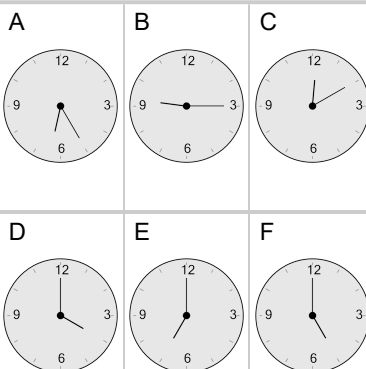


Time - Elapsed Negative - Clock and Hours & Minutes to Clock - Half Hours

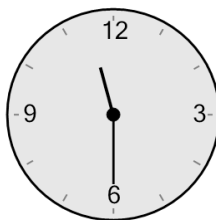
1 What will the time be after the given change?



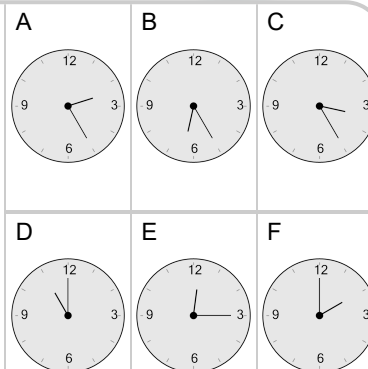
Subtract 30 mins



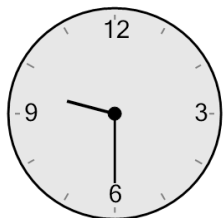
2 What will the time be after the given change?



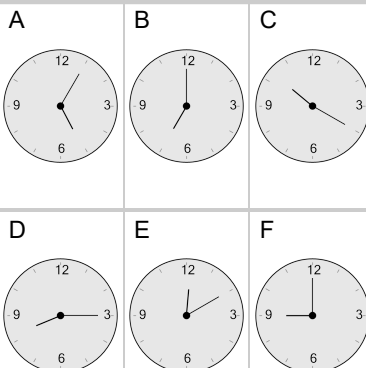
Subtract 30 mins



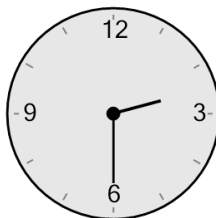
3 What will the time be after the given change?



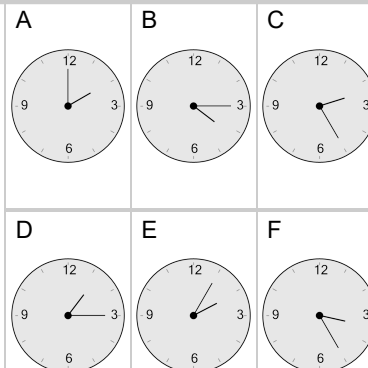
Subtract 30 mins



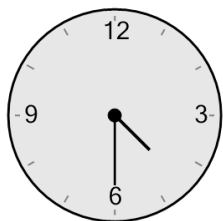
4 What will the time be after the given change?



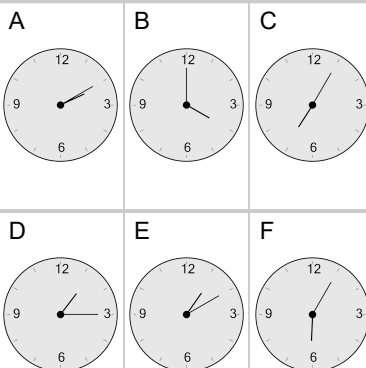
Subtract 30 mins



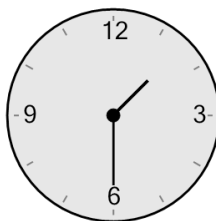
5 What will the time be after the given change?



Subtract 30 mins



6 What will the time be after the given change?



Subtract 30 mins

