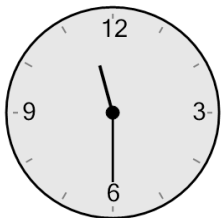


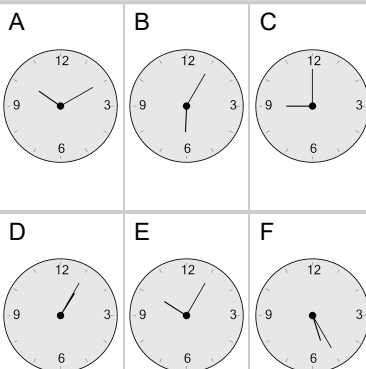


Time - Elapsed Negative - Clock and Hours & Minutes to Clock - Half Hours

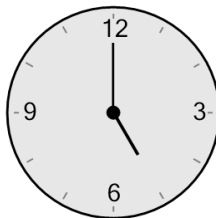
1 What will the time be after the given change?



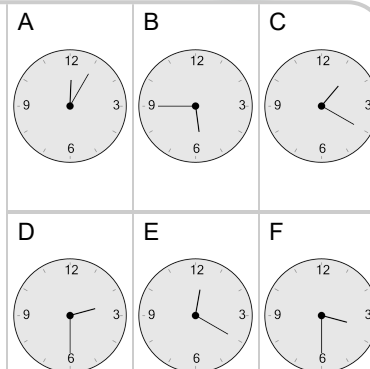
Subtract 2 hrs 30 mins



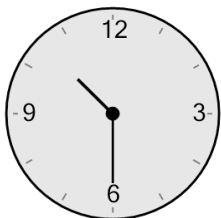
2 What will the time be after the given change?



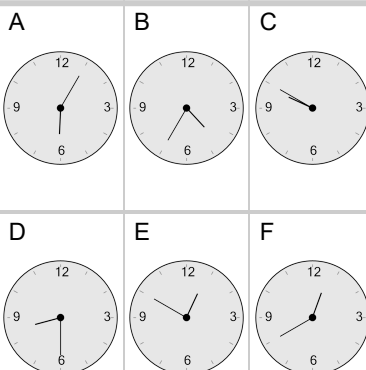
Subtract 1 hr 30 mins



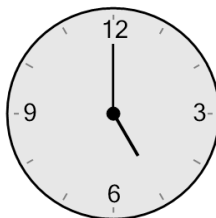
3 What will the time be after the given change?



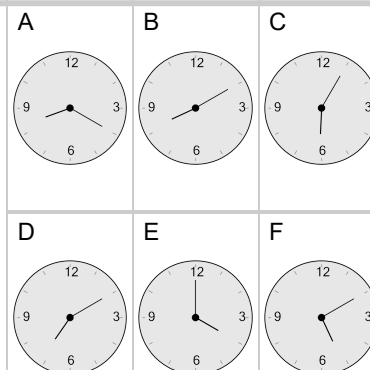
Subtract 2 hrs



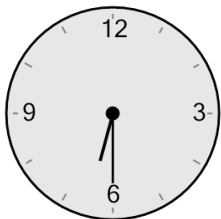
4 What will the time be after the given change?



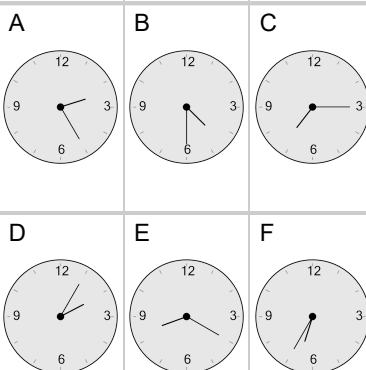
Subtract 1 hr



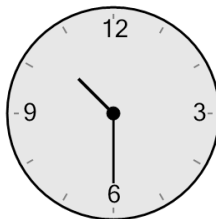
5 What will the time be after the given change?



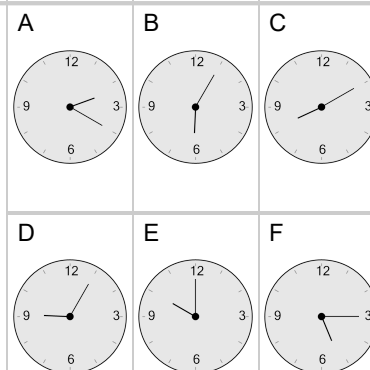
Subtract 2 hrs



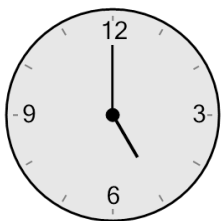
6 What will the time be after the given change?



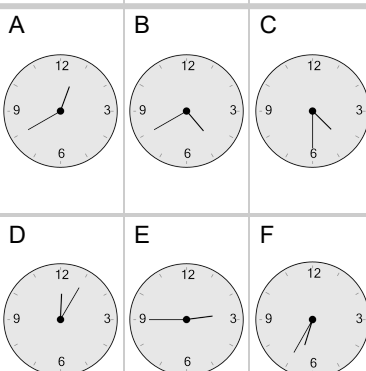
Subtract 30 mins



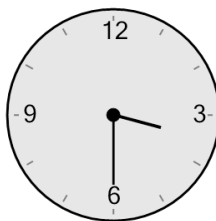
7 What will the time be after the given change?



Subtract 30 mins



8 What will the time be after the given change?



Subtract 1 hr 30 mins

