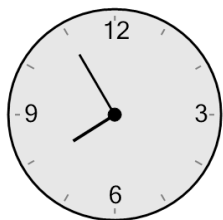
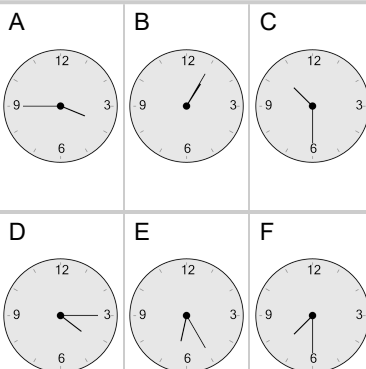


Time - Elapsed Negative - Clock and Hours & Minutes to Clock - One Minutes

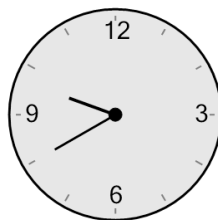
1 What will the time be after the given change?



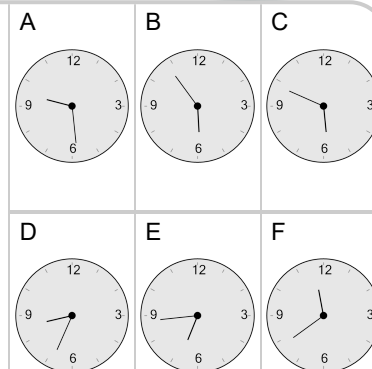
Subtract 1 hr 30 mins



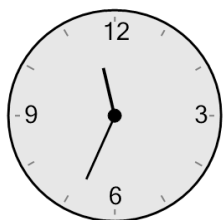
2 What will the time be after the given change?



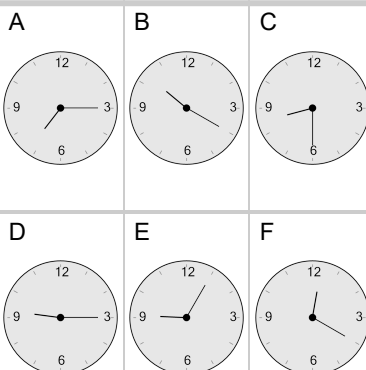
Subtract 1 hr 6 mins



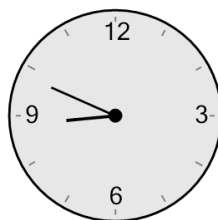
3 What will the time be after the given change?



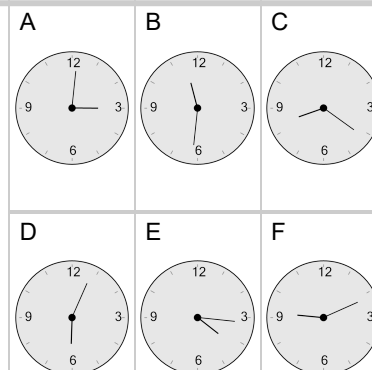
Subtract 1 hr 14 mins



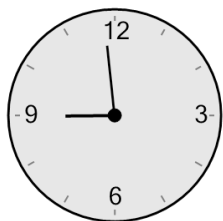
4 What will the time be after the given change?



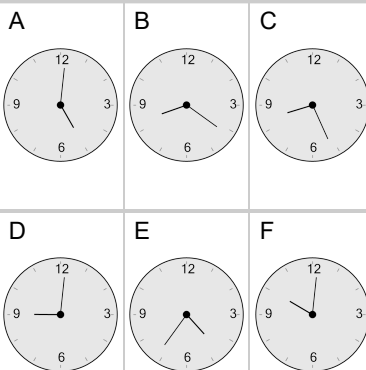
Subtract 28 mins



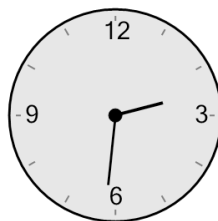
5 What will the time be after the given change?



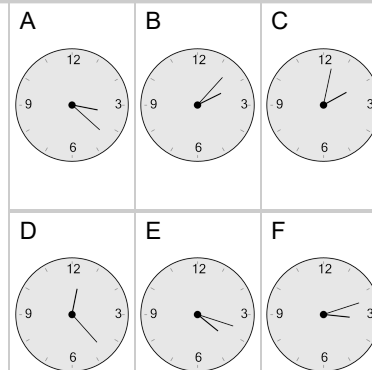
Subtract 33 mins



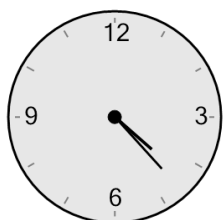
6 What will the time be after the given change?



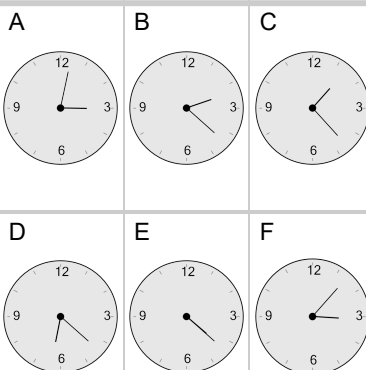
Subtract 29 mins




7 What will the time be after the given change?



Subtract 1 hr 21 mins



8 What will the time be after the given change?



Subtract 47 mins

