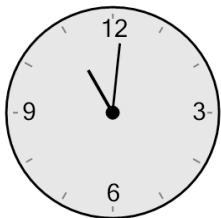
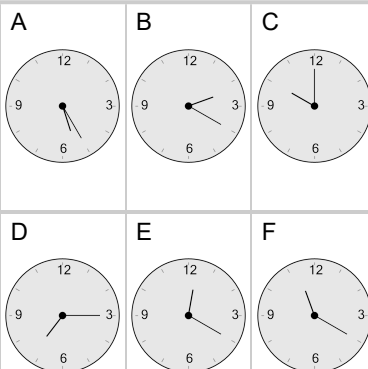


Time - Elapsed Negative - Clock and Hours & Minutes to Clock - Quarter Hours

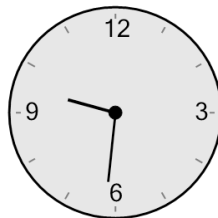
1 What will the time be after the given change?



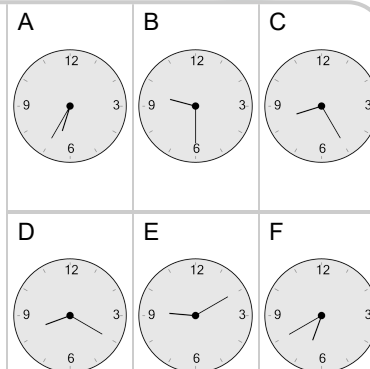
Subtract 1 hr 1 min



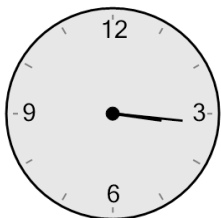
2 What will the time be after the given change?



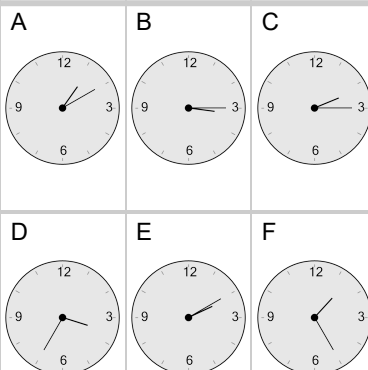
Subtract 1 min



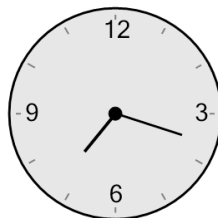
3 What will the time be after the given change?



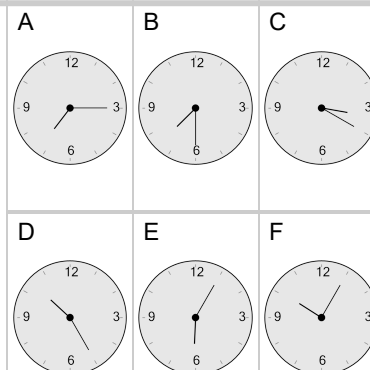
Subtract 1 min



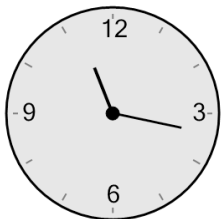
4 What will the time be after the given change?



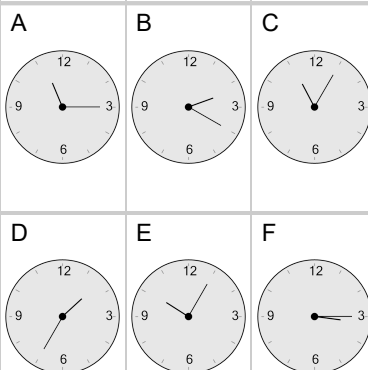
Subtract 3 mins



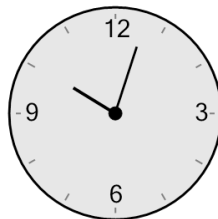
5 What will the time be after the given change?



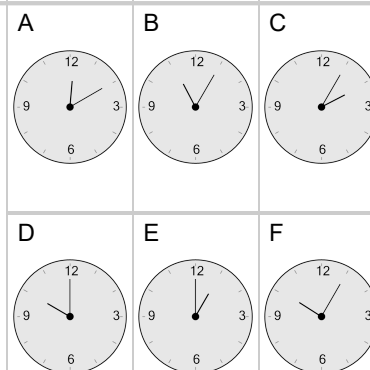
Subtract 2 mins



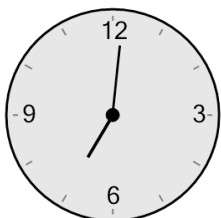
6 What will the time be after the given change?



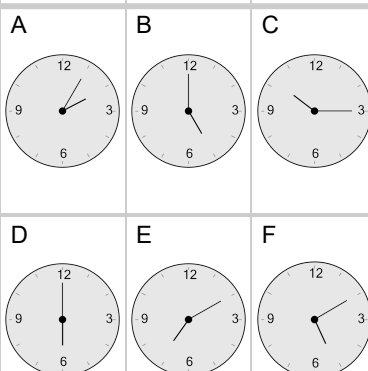
Subtract 3 mins



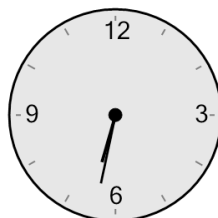
7 What will the time be after the given change?



Subtract 1 hr 1 min



8 What will the time be after the given change?



Subtract 1 hr 2 mins

