

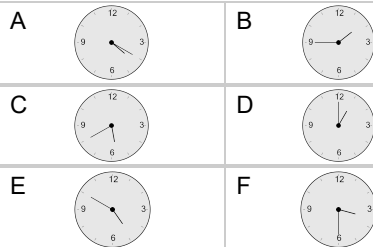
Time - Elapsed - Time and Hours & Minutes to Clock - Five Minutes

1

What will the time be after the given change?

1:15

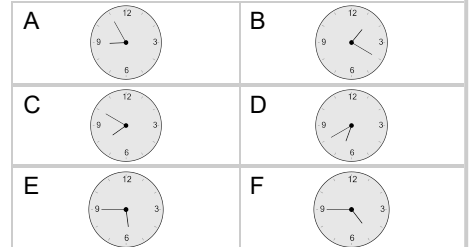
Add 30 mins

**2**

What will the time be after the given change?

5:35

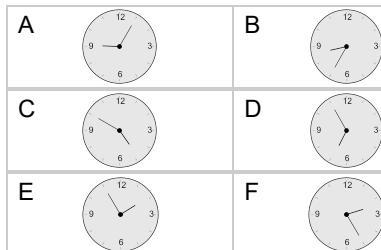
Add 10 mins

**3**

What will the time be after the given change?

4:30

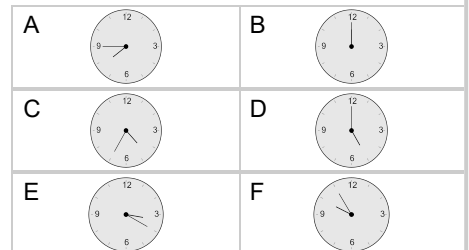
Add 20 mins

**4**

What will the time be after the given change?

7:35

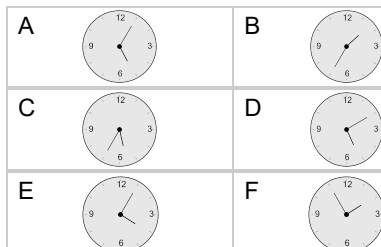
Add 10 mins

**5**

What will the time be after the given change?

1:20

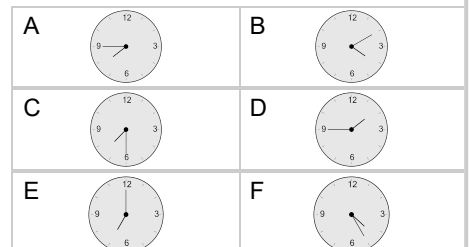
Add 35 mins

**6**

What will the time be after the given change?

4:05

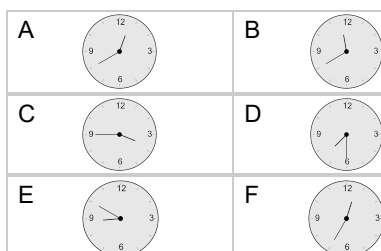
Add 20 mins

**7**

What will the time be after the given change?

11:35

Add 5 mins

**8**

What will the time be after the given change?

3:40

Add 5 mins

