

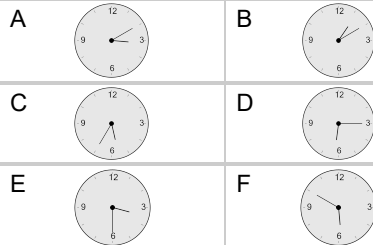
## Time - Elapsed - Time and Hours & Minutes to Clock - Five Minutes

**1**

What will the time be after the given change?

2:55

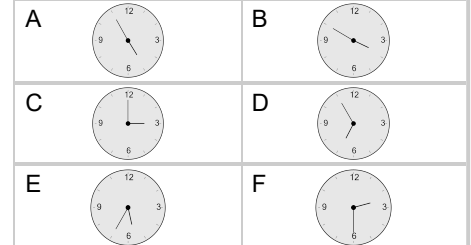
Add 35 mins

**2**

What will the time be after the given change?

2:15

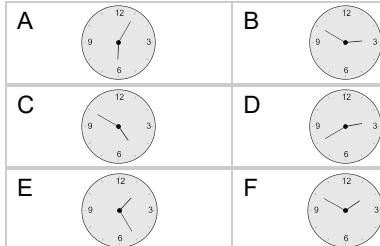
Add 1 hr 35 mins

**3**

What will the time be after the given change?

1:15

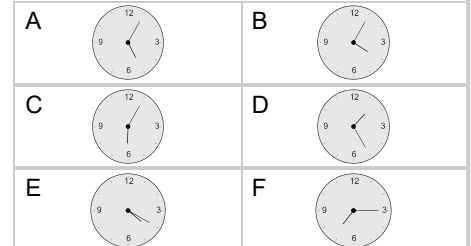
Add 35 mins

**4**

What will the time be after the given change?

2:10

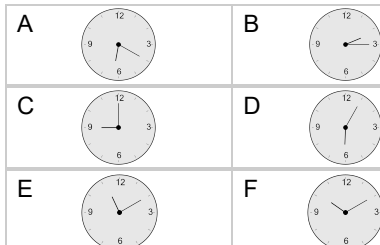
Add 2 hrs 10 mins

**5**

What will the time be after the given change?

8:25

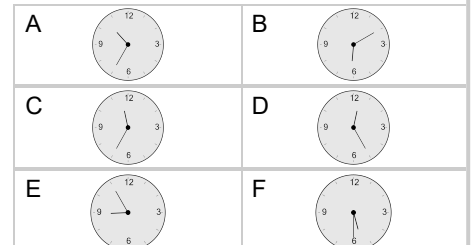
Add 1 hr 45 mins

**6**

What will the time be after the given change?

8:20

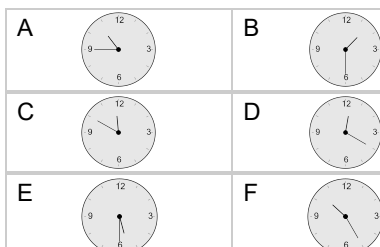
Add 2 hrs 15 mins

**7**

What will the time be after the given change?

10:35

Add 10 mins

**8**

What will the time be after the given change?

8:25

Add 1 hr 5 mins

