

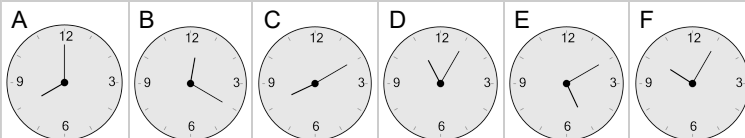


Time - Elapsed - Time and Hours & Minutes to Clock - Full Hours

1 What will the time be after the given change?

7:00

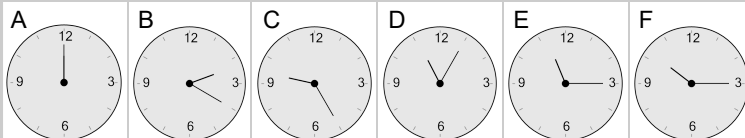
Add 1 hr



2 What will the time be after the given change?

11:00

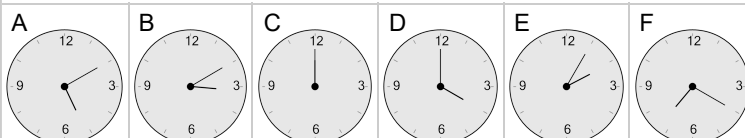
Add 1 hr



3 What will the time be after the given change?

3:00

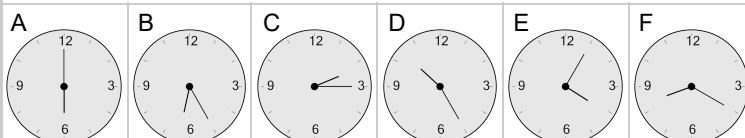
Add 1 hr



4 What will the time be after the given change?

5:00

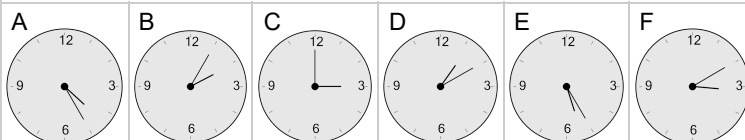
Add 1 hr



5 What will the time be after the given change?

2:00

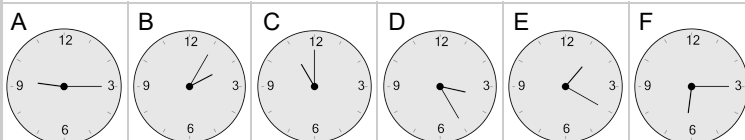
Add 1 hr



6 What will the time be after the given change?

10:00

Add 1 hr



7 What will the time be after the given change?

4:00

Add 1 hr

