



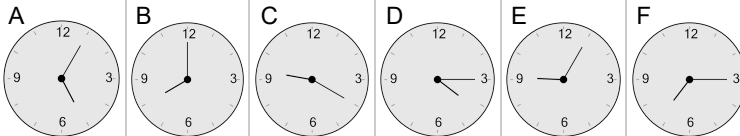
Time - Elapsed - Time and Hours & Minutes to Clock - Full Hours



1 What will the time be after the given change?

6:00

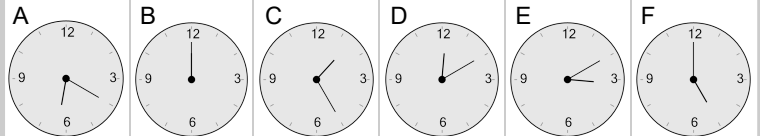
Add 2 hrs



2 What will the time be after the given change?

2:00

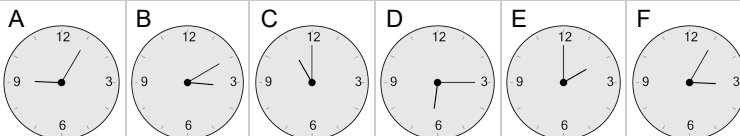
Add 3 hrs



3 What will the time be after the given change?

8:00

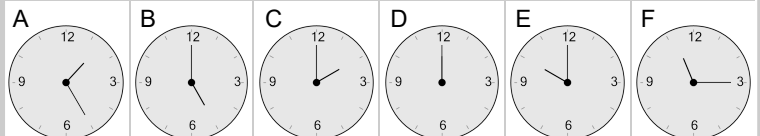
Add 3 hrs



4 What will the time be after the given change?

9:00

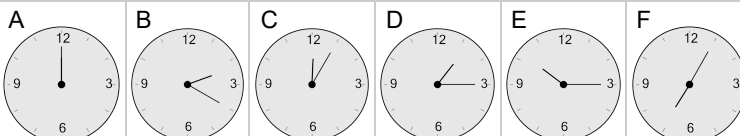
Add 1 hr



5 What will the time be after the given change?

9:00

Add 3 hrs



6 What will the time be after the given change?

4:00

Add 3 hrs

