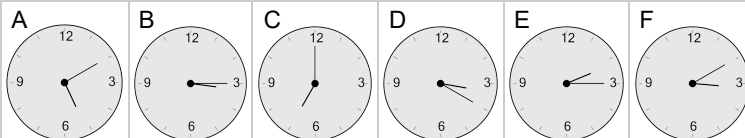


Time - Elapsed - Time and Hours & Minutes to Clock - Full Hours

1 What will the time be after the given change?

6:00

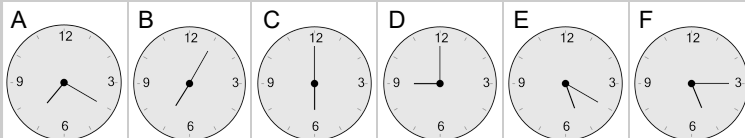
Add 1 hr



2 What will the time be after the given change?

4:00

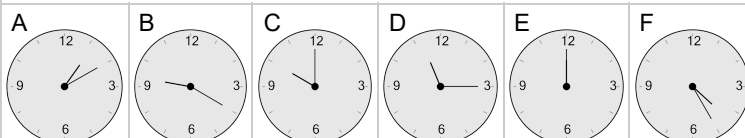
Add 2 hrs



3 What will the time be after the given change?

10:00

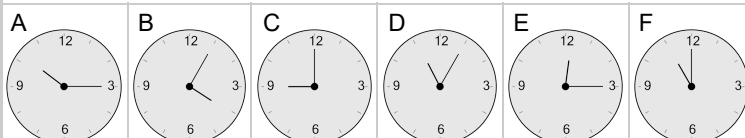
Add 2 hrs



4 What will the time be after the given change?

7:00

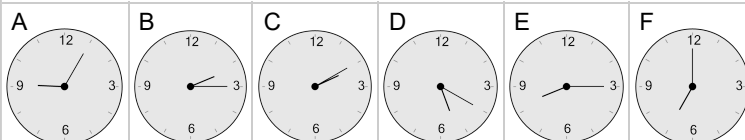
Add 2 hrs



5 What will the time be after the given change?

5:00

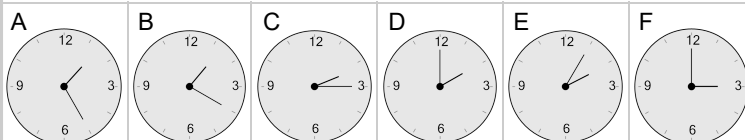
Add 2 hrs



6 What will the time be after the given change?

1:00

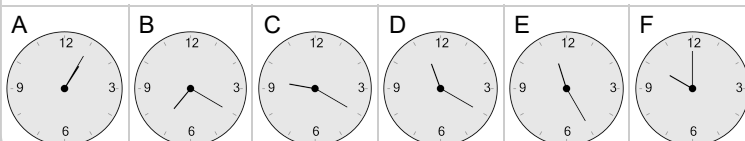
Add 2 hrs



7 What will the time be after the given change?

8:00

Add 2 hrs



8 What will the time be after the given change?

8:00

Add 1 hr

