

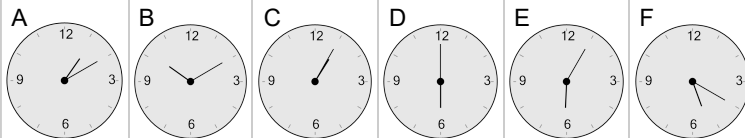


Time - Elapsed - Time and Hours & Minutes to Clock - Half Hours

1 What will the time be after the given change?

5:00

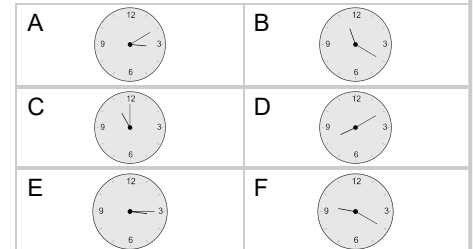
Add 1 hr



2 What will the time be after the given change?

10:30

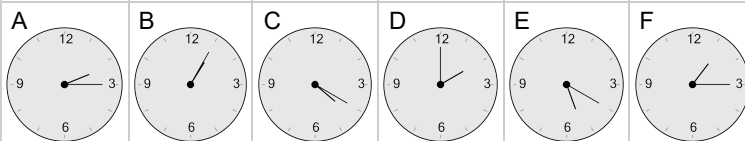
Add 30 mins



3 What will the time be after the given change?

1:00

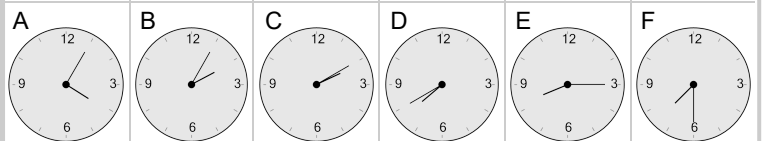
Add 1 hr



4 What will the time be after the given change?

6:30

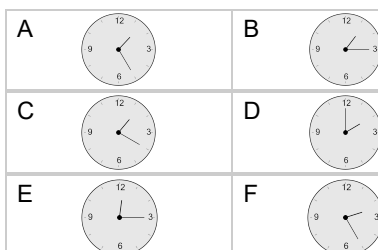
Add 1 hr



5 What will the time be after the given change?

1:30

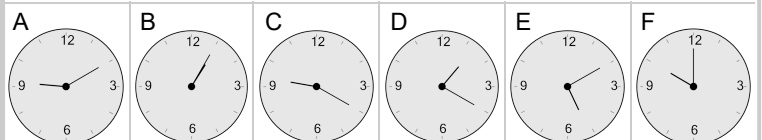
Add 30 mins



6 What will the time be after the given change?

9:00

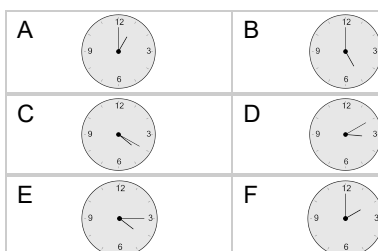
Add 1 hr



7 What will the time be after the given change?

4:30

Add 30 mins



8 What will the time be after the given change?

10:30

Add 1 hr

