

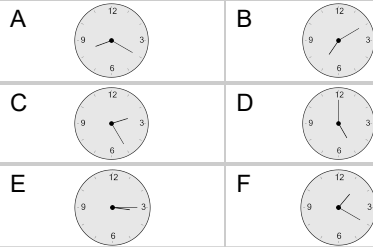
Time - Elapsed - Time and Hours & Minutes to Clock - Half Hours

1

What will the time be after the given change?

3:30

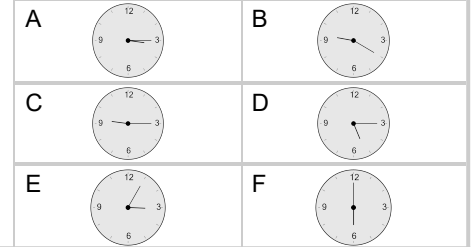
Add 1 hr 30 mins

**2**

What will the time be after the given change?

5:30

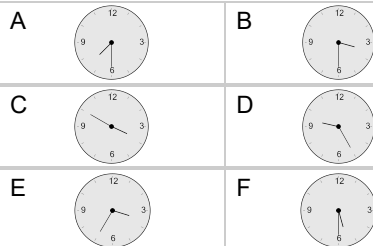
Add 30 mins

**3**

What will the time be after the given change?

6:00

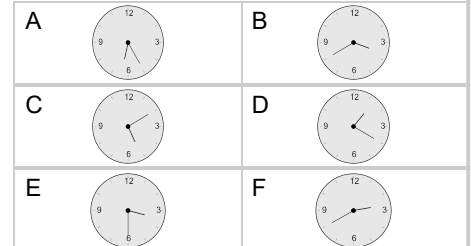
Add 1 hr 30 mins

**4**

What will the time be after the given change?

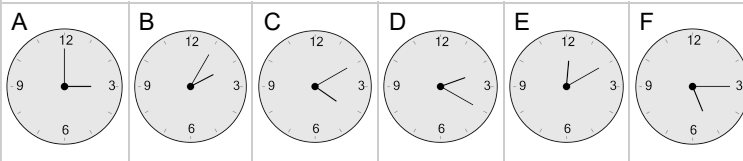
2:00

Add 1 hr 30 mins

**5** What will the time be after the given change?

1:00

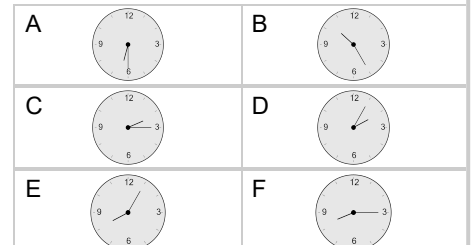
Add 2 hrs

**6**

What will the time be after the given change?

4:00

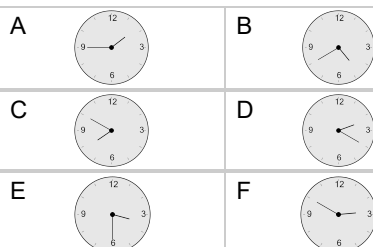
Add 2 hrs 30 mins

**7**

What will the time be after the given change?

1:00

Add 2 hrs 30 mins

**8**

What will the time be after the given change?

2:30

Add 30 mins

