



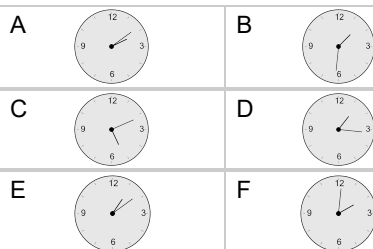
## Time - Elapsed - Time and Hours & Minutes to Clock - One Minutes

**1**

What will the time be after the given change?

1:14

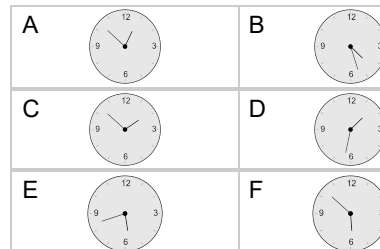
Add 2 mins

**2**

What will the time be after the given change?

5:20

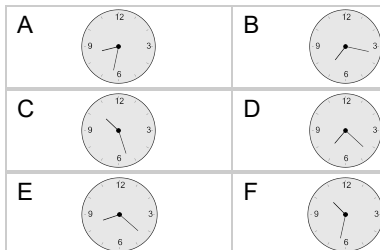
Add 22 mins

**3**

What will the time be after the given change?

7:14

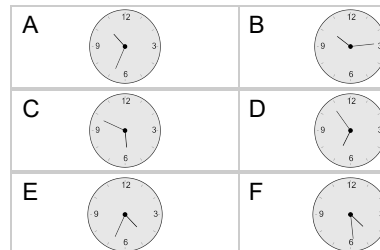
Add 1 hr 18 mins

**4**

What will the time be after the given change?

5:24

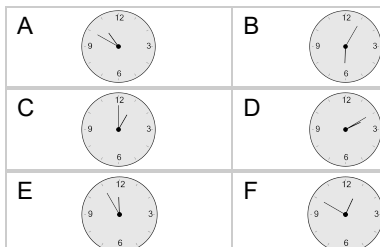
Add 1 hr 30 mins

**5**

What will the time be after the given change?

10:26

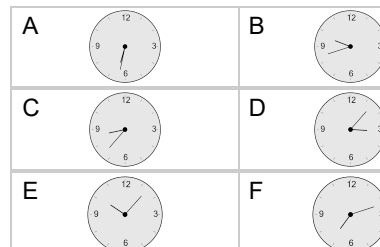
Add 24 mins

**6**

What will the time be after the given change?

5:56

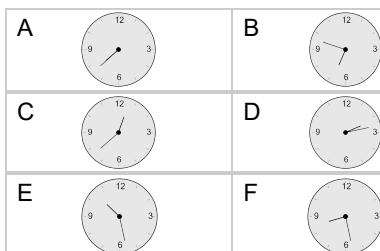
Add 36 mins

**7**

What will the time be after the given change?

9:06

Add 1 hr 22 mins

**8**

What will the time be after the given change?

3:18

Add 12 mins

