



Time - Elapsed - Time and Hours & Minutes to Clock - Quarter Hours

1

What will the time be after the given change?

2:00

Add 3 mins

A



B



C



D



E



F

**2**

What will the time be after the given change?

11:30

Add 3 mins

A



B



C



D



E



F

**3**

What will the time be after the given change?

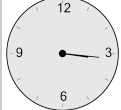
3:15

Add 1 min

A



B



C



D



E



F

**4**

What will the time be after the given change?

2:30

Add 3 mins

A



B



C



D



E



F

**5**

What will the time be after the given change?

7:00

Add 3 mins

A



B



C



D



E



F

**6**

What will the time be after the given change?

3:00

Add 1 hr 2 mins

A



B



C



D



E



F

**7**

What will the time be after the given change?

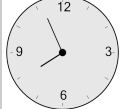
3:45

Add 1 min

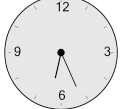
A



B



C



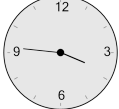
D



E



F

**8**

What will the time be after the given change?

5:00

Add 1 hr 2 mins

A



B



C



D



E



F

