



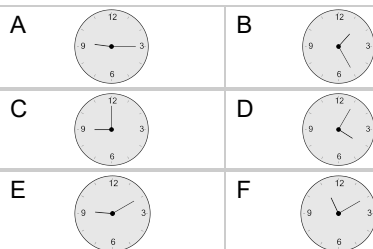
Time - Elapsed - Time and Minutes to Clock - Half Hours

1

What will the time be after the given change?

8:30

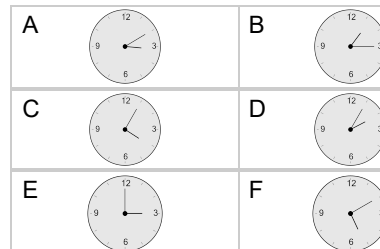
Add 30 mins

**2**

What will the time be after the given change?

2:30

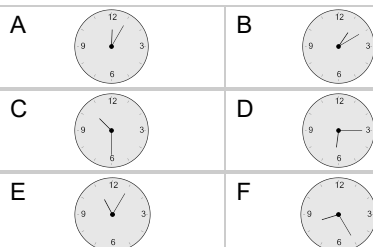
Add 30 mins

**3**

What will the time be after the given change?

9:30

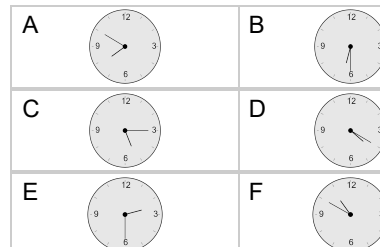
Add 60 mins

**4**

What will the time be after the given change?

5:30

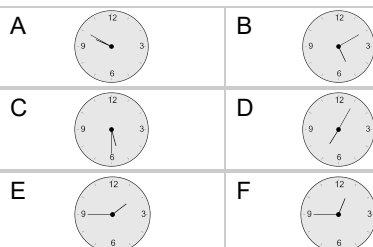
Add 60 mins

**5**

What will the time be after the given change?

3:00

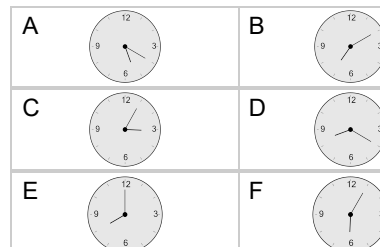
Add 150 mins

**6**

What will the time be after the given change?

6:00

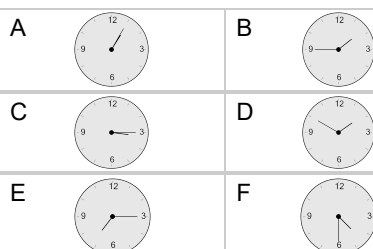
Add 120 mins

**7**

What will the time be after the given change?

2:00

Add 150 mins

**8**

What will the time be after the given change?

2:00

Add 60 mins

