



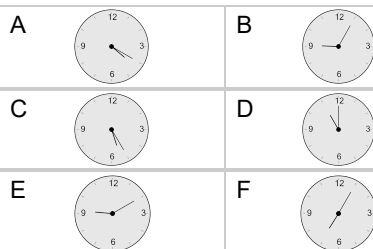
Time - Elapsed - Time and Minutes to Clock - One Minutes

1

What will the time be after the given change?

6:57

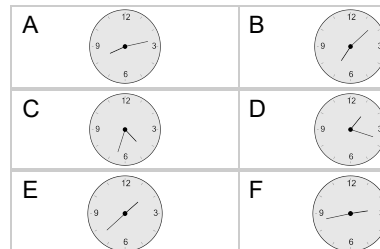
Add 8 mins

**2**

What will the time be after the given change?

3:05

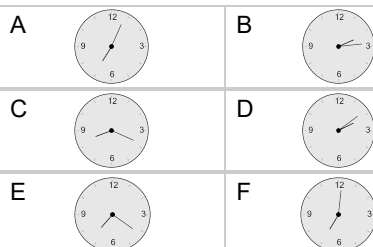
Add 88 mins

**3**

What will the time be after the given change?

6:28

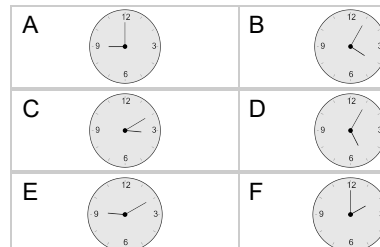
Add 36 mins

**4**

What will the time be after the given change?

4:00

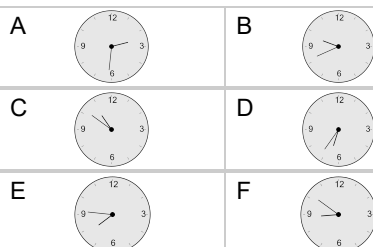
Add 65 mins

**5**

What will the time be after the given change?

6:00

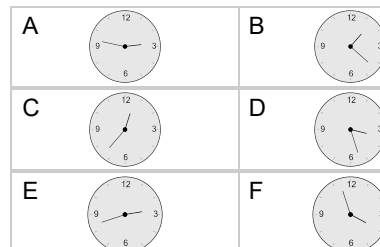
Add 106 mins

**6**

What will the time be after the given change?

2:05

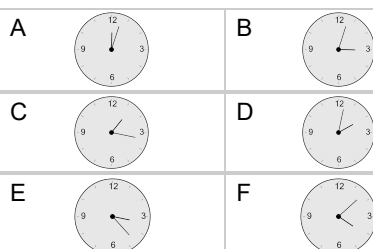
Add 42 mins

**7**

What will the time be after the given change?

3:01

Add 2 mins

**8**

What will the time be after the given change?

8:40

Add 78 mins

