

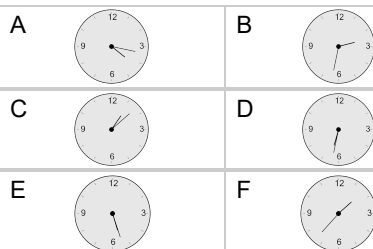


Time - Elapsed - Time and Minutes to Clock - Quarter Hours

1 What will the time be after the given change?

3:15

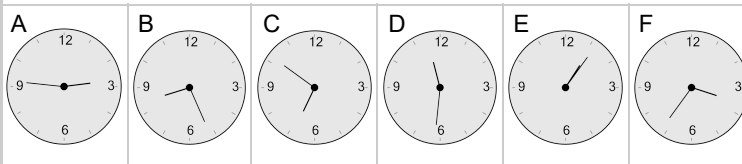
Add 62 mins



2 What will the time be after the given change?

11:30

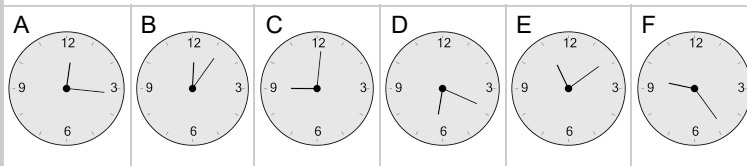
Add 1 min



3 What will the time be after the given change?

9:00

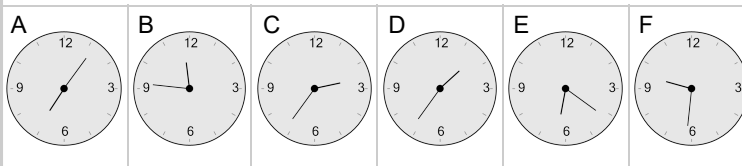
Add 1 min



4 What will the time be after the given change?

11:45

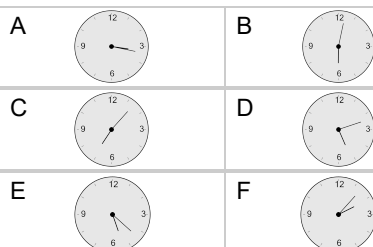
Add 1 min



5 What will the time be after the given change?

2:15

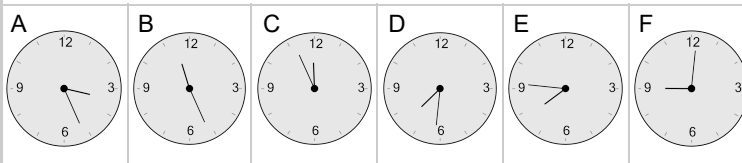
Add 62 mins



6 What will the time be after the given change?

7:45

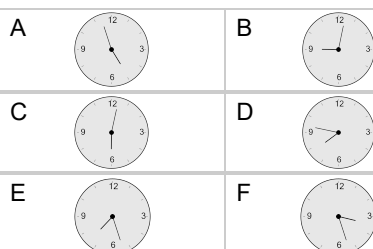
Add 1 min



7 What will the time be after the given change?

7:45

Add 2 mins



8 What will the time be after the given change?

4:30

Add 62 mins

