

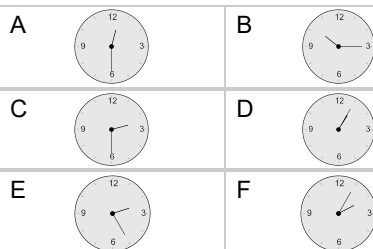
## Time - Elapsed Negative - Time and Hours & Minutes to Clock - Five Minutes

**1**

What will the time be after the given change?

10:35

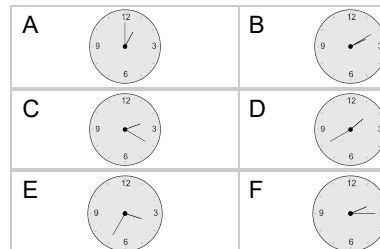
Subtract 20 mins

**2**

What will the time be after the given change?

3:05

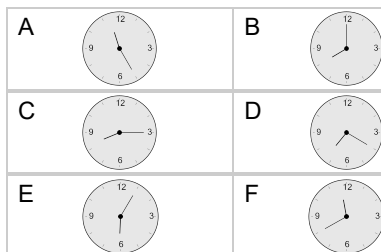
Subtract 45 mins

**3**

What will the time be after the given change?

8:35

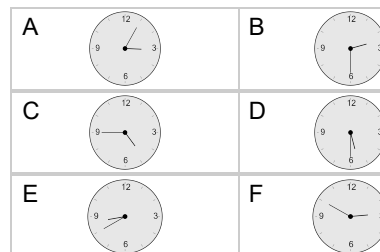
Subtract 1 hr 15 mins

**4**

What will the time be after the given change?

5:35

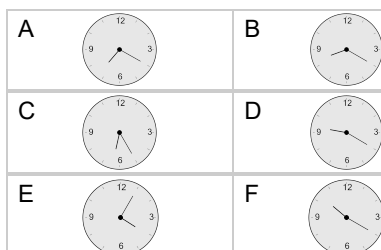
Subtract 5 mins

**5**

What will the time be after the given change?

10:40

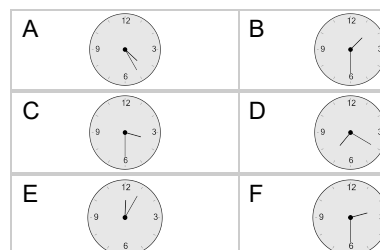
Subtract 1 hr 20 mins

**6**

What will the time be after the given change?

4:35

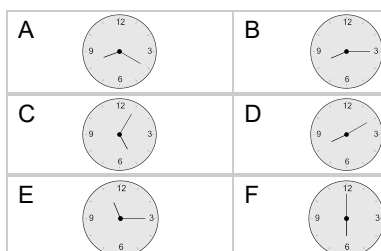
Subtract 1 hr 5 mins

**7**

What will the time be after the given change?

9:40

Subtract 1 hr 30 mins

**8**

What will the time be after the given change?

3:50

Subtract 1 hr 50 mins

