



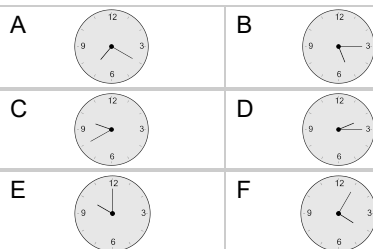
Time - Elapsed Negative - Time and Hours & Minutes to Clock - Five Minutes

1

What will the time be after the given change?

7:25

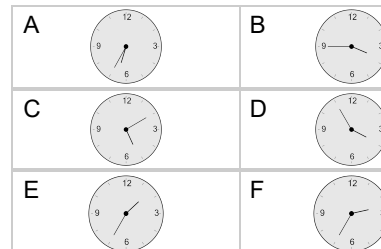
Subtract 5 mins

**2**

What will the time be after the given change?

8:05

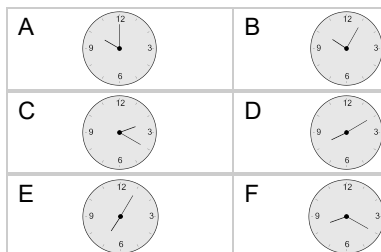
Subtract 1 hr 30 mins

**3**

What will the time be after the given change?

12:40

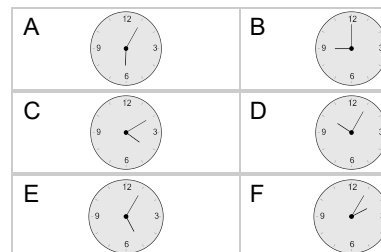
Subtract 2 hrs 40 mins

**4**

What will the time be after the given change?

7:40

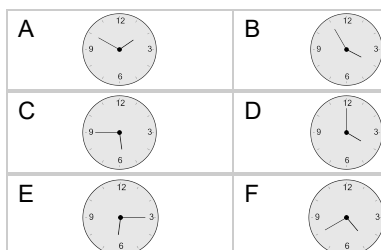
Subtract 1 hr 35 mins

**5**

What will the time be after the given change?

5:10

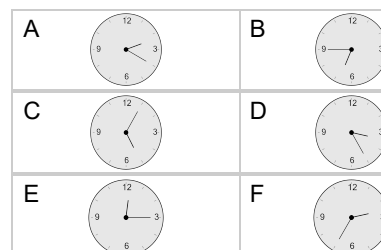
Subtract 30 mins

**6**

What will the time be after the given change?

5:45

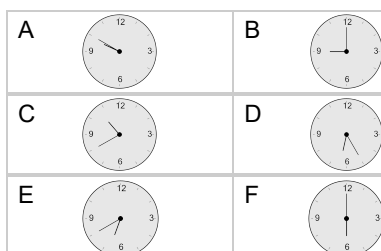
Subtract 2 hrs 20 mins

**7**

What will the time be after the given change?

7:30

Subtract 50 mins

**8**

What will the time be after the given change?

3:50

Subtract 1 hr 15 mins

