



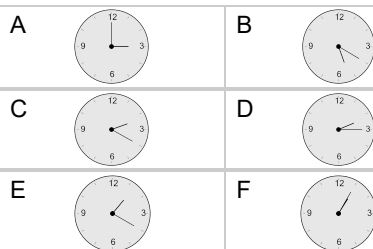
Time - Elapsed Negative - Time and Hours & Minutes to Clock - Half Hours

1

What will the time be after the given change?

3:30

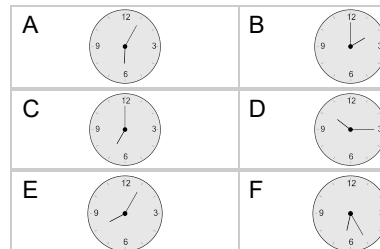
Subtract 30 mins

**2**

What will the time be after the given change?

7:30

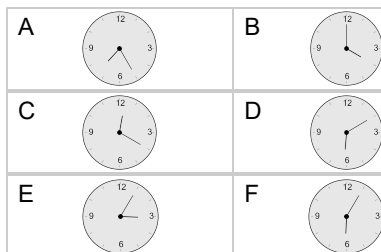
Subtract 30 mins

**3**

What will the time be after the given change?

4:30

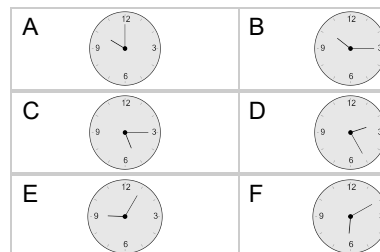
Subtract 30 mins

**4**

What will the time be after the given change?

10:30

Subtract 30 mins

**5**

What will the time be after the given change?

1:30

Subtract 30 mins

