



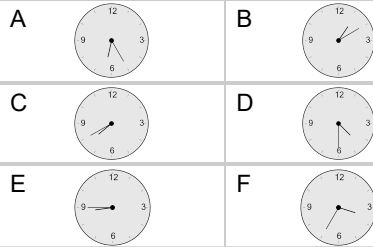
Time - Elapsed Negative - Time and Hours & Minutes to Clock - Half Hours

1

What will the time be after the given change?

5:00

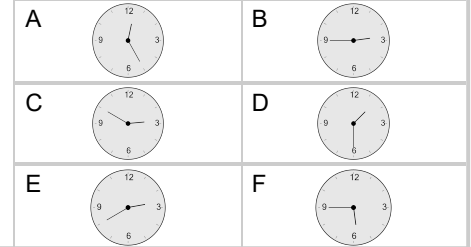
Subtract 30 mins

**2**

What will the time be after the given change?

2:30

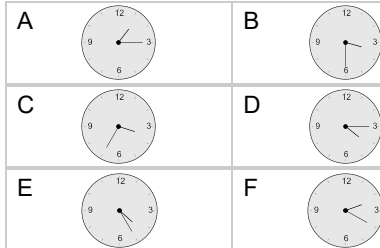
Subtract 1 hr

**3**

What will the time be after the given change?

4:30

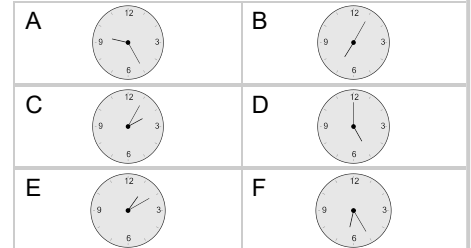
Subtract 1 hr

**4**

What will the time be after the given change?

5:30

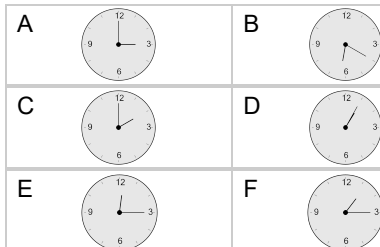
Subtract 30 mins

**5**

What will the time be after the given change?

3:30

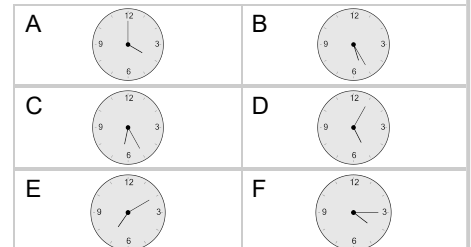
Subtract 1 hr 30 mins

**6**

What will the time be after the given change?

5:00

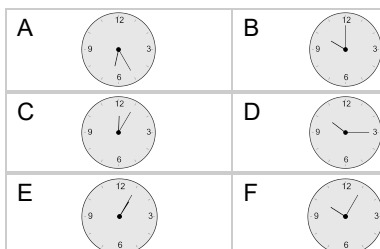
Subtract 1 hr

**7**

What will the time be after the given change?

11:30

Subtract 1 hr 30 mins

**8**

What will the time be after the given change?

7:00

Subtract 1 hr

