



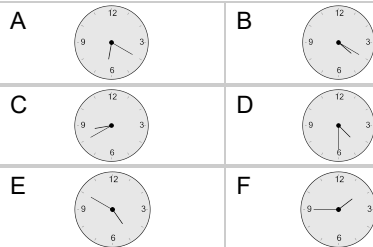
Time - Elapsed Negative - Time and Hours & Minutes to Clock - Half Hours

**1**

What will the time be after the given change?

6:00

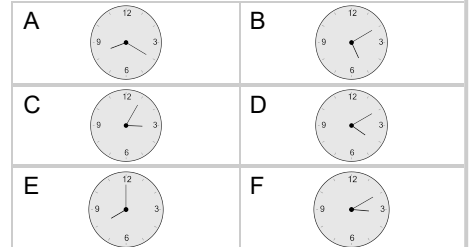
Subtract 1 hr 30 mins

**2**

What will the time be after the given change?

10:00

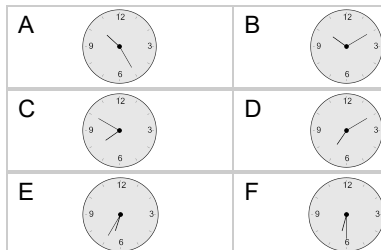
Subtract 2 hrs

**3**

What will the time be after the given change?

8:00

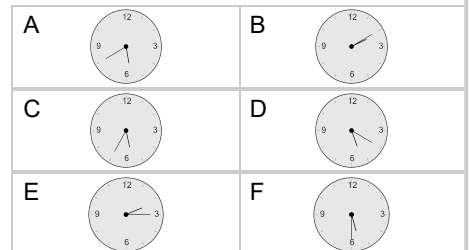
Subtract 1 hr 30 mins

**4**

What will the time be after the given change?

7:30

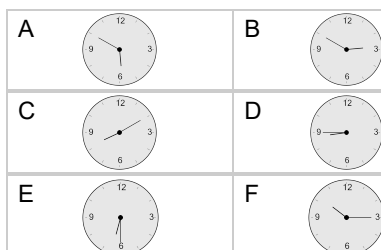
Subtract 2 hrs

**5**

What will the time be after the given change?

8:30

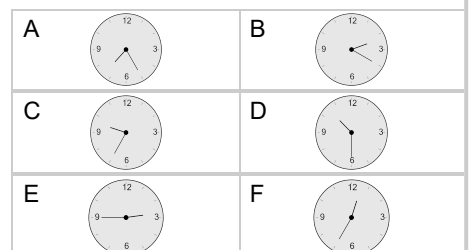
Subtract 2 hrs

**6**

What will the time be after the given change?

11:00

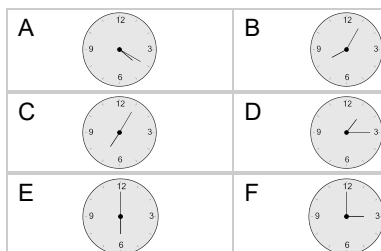
Subtract 30 mins

**7**

What will the time be after the given change?

8:30

Subtract 2 hrs 30 mins

**8**

What will the time be after the given change?

10:00

Subtract 30 mins

