

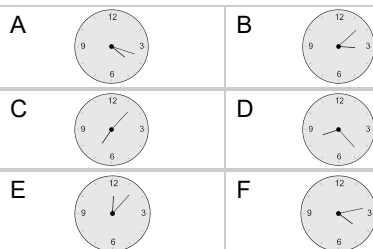
Time - Elapsed Negative - Time and Hours & Minutes to Clock - One Minutes

1

What will the time be after the given change?

5:51

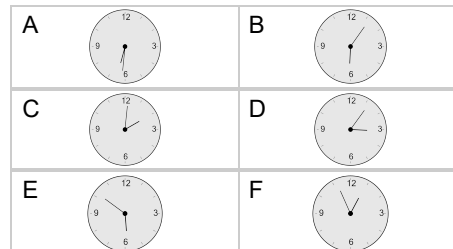
Subtract 1 hr 33 mins

**2**

What will the time be after the given change?

5:55

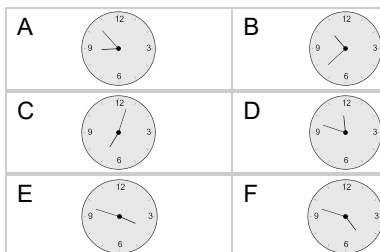
Subtract 4 mins

**3**

What will the time be after the given change?

9:05

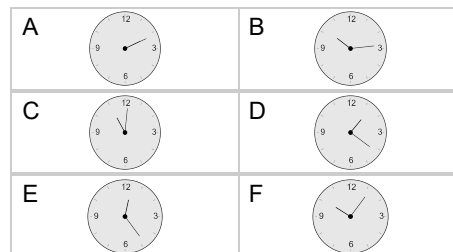
Subtract 12 mins

**4**

What will the time be after the given change?

11:35

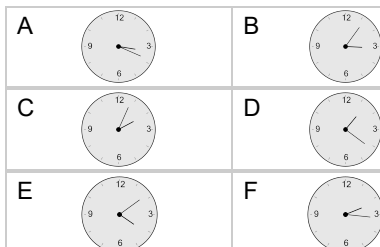
Subtract 34 mins

**5**

What will the time be after the given change?

3:15

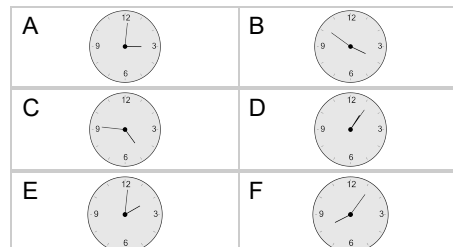
Subtract 9 mins

**6**

What will the time be after the given change?

4:42

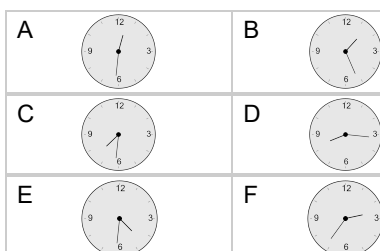
Subtract 51 mins

**7**

What will the time be after the given change?

5:04

Subtract 33 mins

**8**

What will the time be after the given change?

2:33

Subtract 18 mins

