

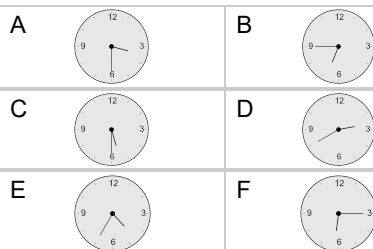
## Time - Elapsed Negative - Time and Hours & Minutes to Clock - Quarter Hours

**1**

What will the time be after the given change?

5:33

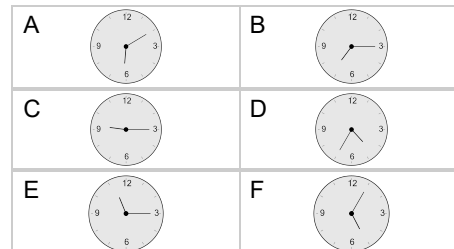
Subtract 3 mins

**2**

What will the time be after the given change?

9:16

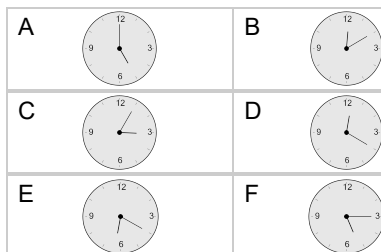
Subtract 1 min

**3**

What will the time be after the given change?

5:01

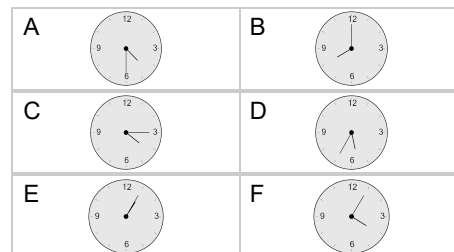
Subtract 1 min

**4**

What will the time be after the given change?

5:16

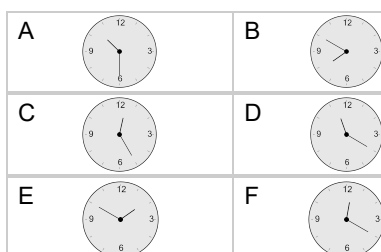
Subtract 1 hr 1 min

**5**

What will the time be after the given change?

10:32

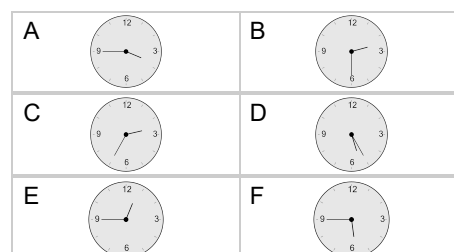
Subtract 2 mins

**6**

What will the time be after the given change?

3:31

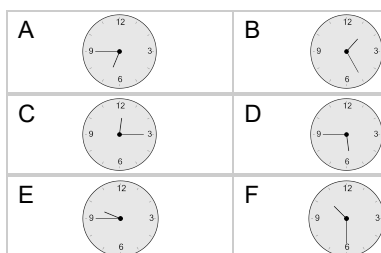
Subtract 1 hr 1 min

**7**

What will the time be after the given change?

10:31

Subtract 1 min

**8**

What will the time be after the given change?

4:17

Subtract 2 mins

