

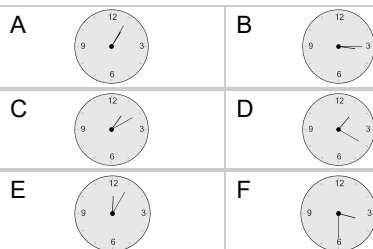
## Time - Elapsed Negative - Time and Hours & Minutes to Clock - Quarter Hours

**1**

What will the time be after the given change?

3:17

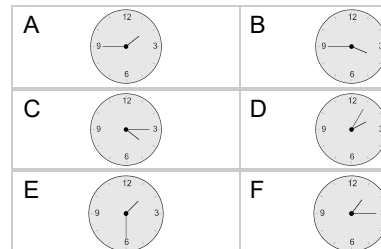
Subtract 2 mins

**2**

What will the time be after the given change?

2:32

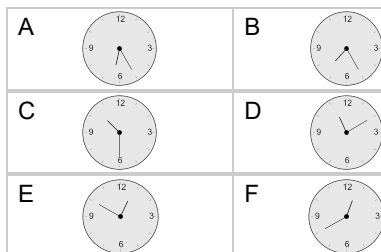
Subtract 1 hr 2 mins

**3**

What will the time be after the given change?

10:33

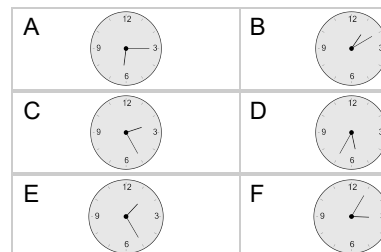
Subtract 3 mins

**4**

What will the time be after the given change?

6:18

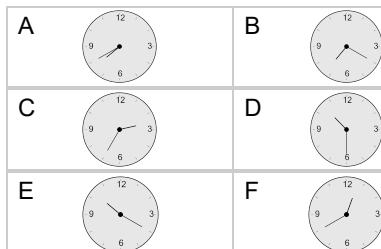
Subtract 3 mins

**5**

What will the time be after the given change?

12:33

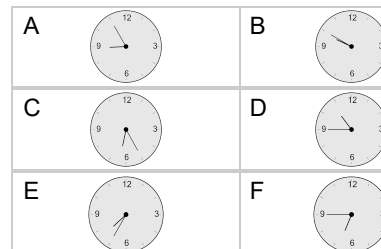
Subtract 2 hrs 3 mins

**6**

What will the time be after the given change?

12:48

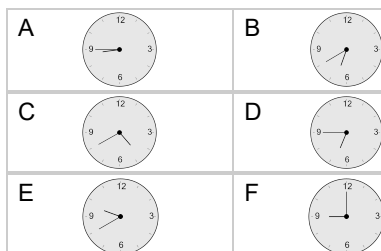
Subtract 2 hrs 3 mins

**7**

What will the time be after the given change?

7:48

Subtract 1 hr 3 mins

**8**

What will the time be after the given change?

4:48

Subtract 2 hrs 3 mins

