



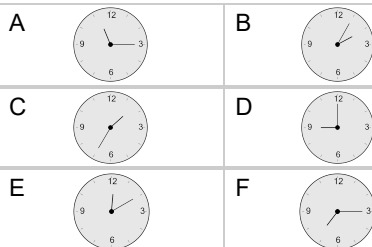
## Time - Elapsed Negative - Time and Minutes to Clock - Five Minutes

**1**

What will the time be after the given change?

12:50

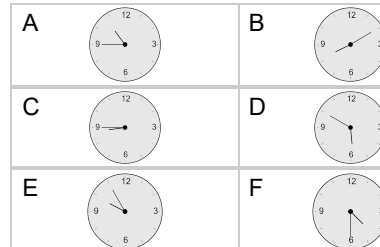
Subtract 95 min

**2**

What will the time be after the given change?

10:40

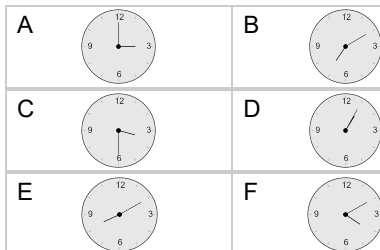
Subtract 45 min

**3**

What will the time be after the given change?

6:50

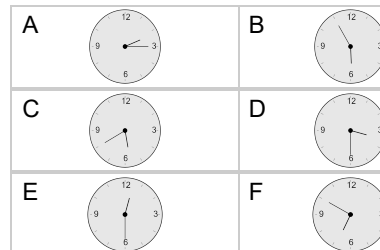
Subtract 160 min

**4**

What will the time be after the given change?

6:05

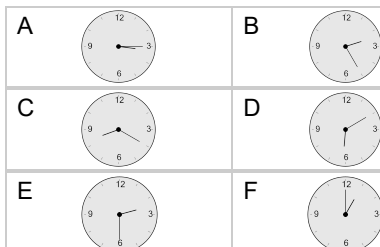
Subtract 10 min

**5**

What will the time be after the given change?

6:35

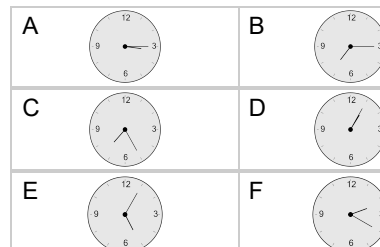
Subtract 25 min

**6**

What will the time be after the given change?

3:50

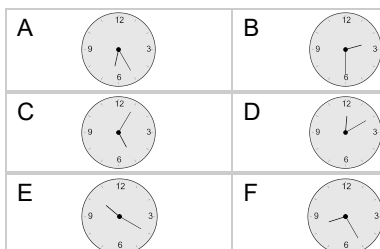
Subtract 35 min

**7**

What will the time be after the given change?

12:10

Subtract 110 min

**8**

What will the time be after the given change?

2:15

Subtract 45 min

