



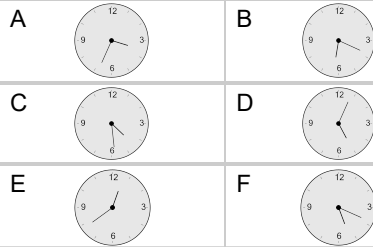
Time - Elapsed Negative - Time and Minutes to Clock - One Minutes

1

What will the time be after the given change?

5:37

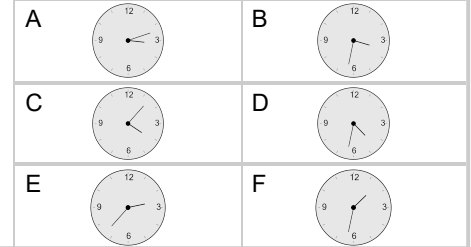
Subtract 18 min

**2**

What will the time be after the given change?

1:55

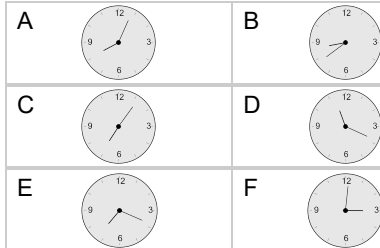
Subtract 23 min

**3**

What will the time be after the given change?

11:42

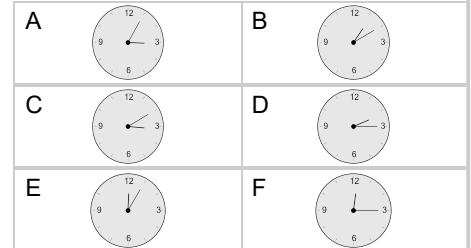
Subtract 23 min

**4**

What will the time be after the given change?

3:07

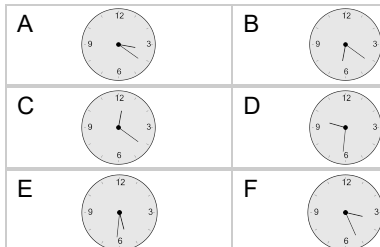
Subtract 2 min

**5**

What will the time be after the given change?

5:47

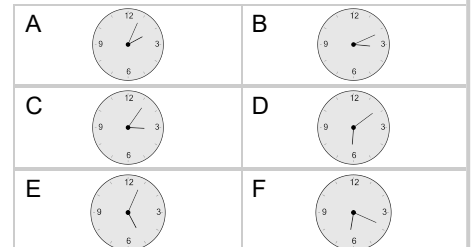
Subtract 16 min

**6**

What will the time be after the given change?

2:50

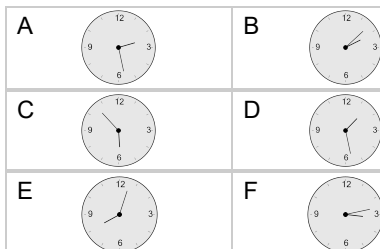
Subtract 46 min

**7**

What will the time be after the given change?

5:57

Subtract 4 min

**8**

What will the time be after the given change?

2:26

Subtract 21 min

