

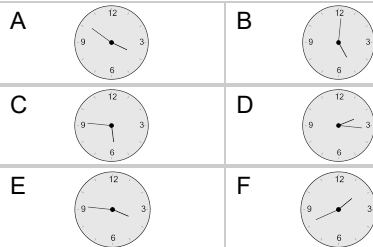
## Time - Elapsed Negative - Time and Minutes to Clock - One Minutes

**1**

What will the time be after the given change?

2:55

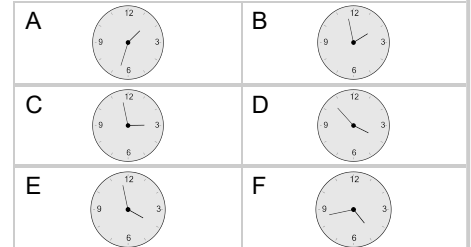
Subtract 74 min

**2**

What will the time be after the given change?

3:54

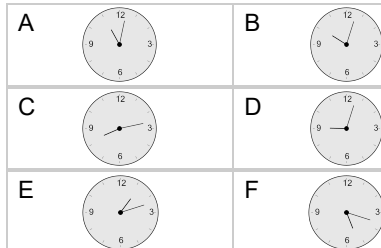
Subtract 56 min

**3**

What will the time be after the given change?

11:18

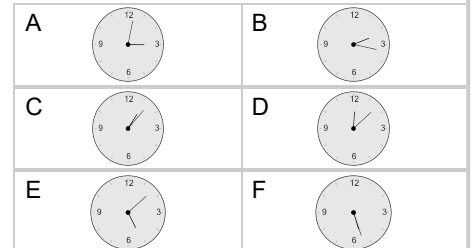
Subtract 75 min

**4**

What will the time be after the given change?

2:13

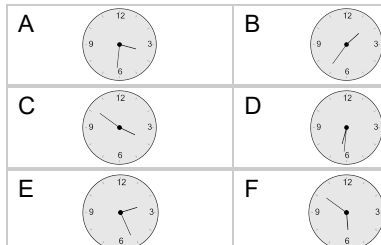
Subtract 66 min

**5**

What will the time be after the given change?

4:08

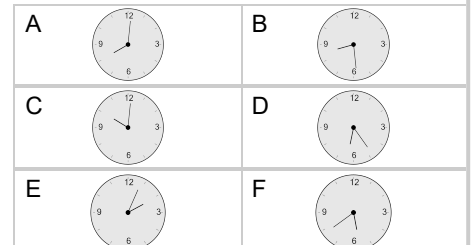
Subtract 17 min

**6**

What will the time be after the given change?

7:05

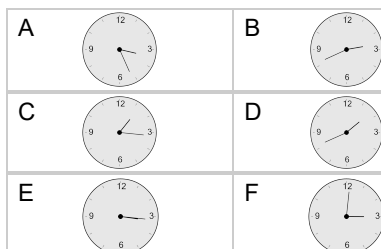
Subtract 41 min

**7**

What will the time be after the given change?

2:27

Subtract 46 min

**8**

What will the time be after the given change?

9:06

Subtract 3 min

