

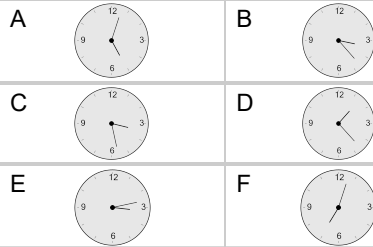
Time - Elapsed Negative - Time and Minutes to Clock - One Minutes

1

What will the time be after the given change?

3:30

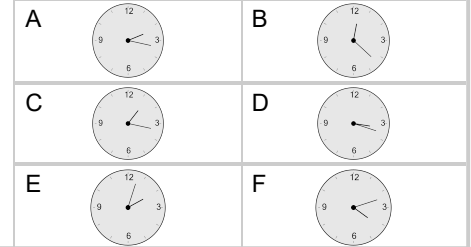
Subtract 17 min

**2**

What will the time be after the given change?

3:07

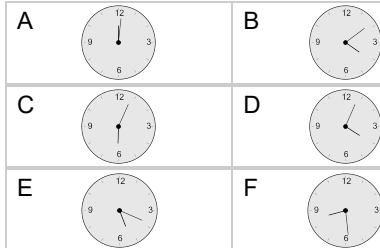
Subtract 64 min

**3**

What will the time be after the given change?

5:47

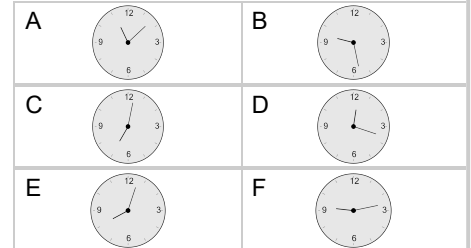
Subtract 28 min

**4**

What will the time be after the given change?

11:34

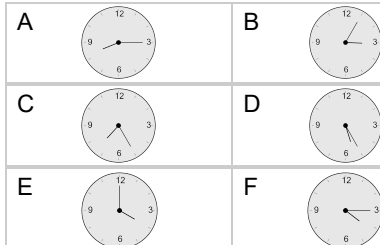
Subtract 26 min

**5**

What will the time be after the given change?

5:18

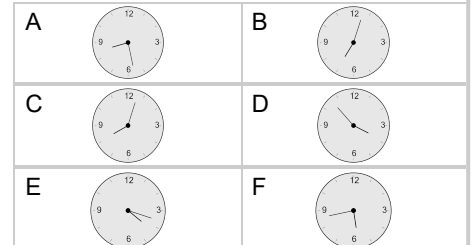
Subtract 63 min

**6**

What will the time be after the given change?

6:12

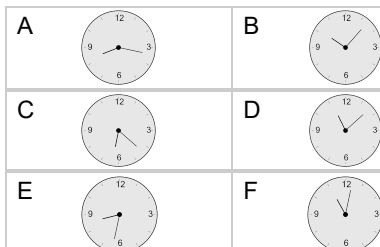
Subtract 29 min

**7**

What will the time be after the given change?

9:14

Subtract 57 min

**8**

What will the time be after the given change?

8:57

Subtract 88 min

