

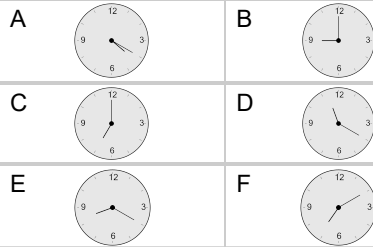
Time - Elapsed Negative - Time and Minutes to Clock - Quarter Hours

1

What will the time be after the given change?

10:03

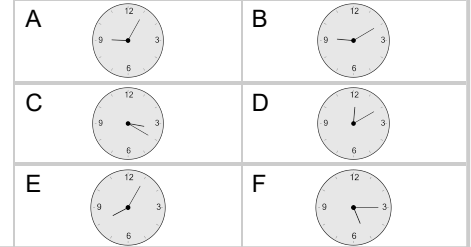
Subtract 63 min

**2**

What will the time be after the given change?

5:16

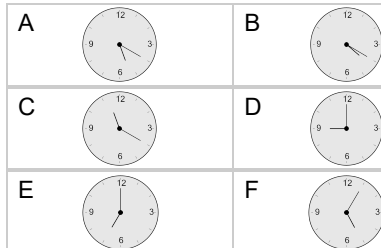
Subtract 1 min

**3**

What will the time be after the given change?

8:03

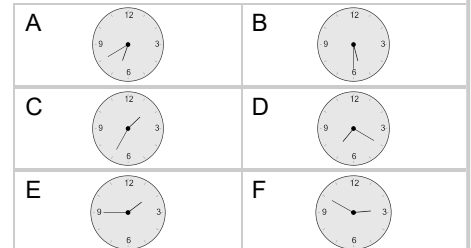
Subtract 63 min

**4**

What will the time be after the given change?

6:31

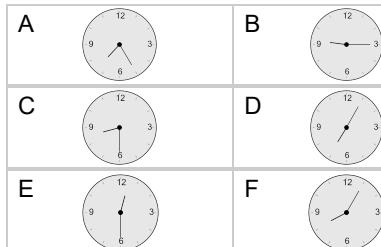
Subtract 61 min

**5**

What will the time be after the given change?

9:18

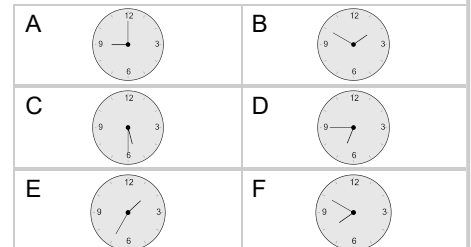
Subtract 3 min

**6**

What will the time be after the given change?

6:47

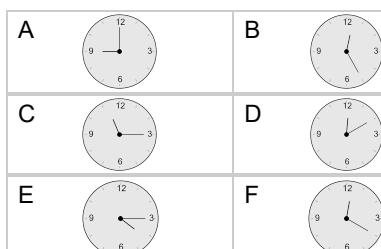
Subtract 2 min

**7**

What will the time be after the given change?

10:02

Subtract 62 min

**8**

What will the time be after the given change?

3:31

Subtract 61 min

