




## Time - Elapsed - Two Clocks To Hours & Minutes - Five Minutes

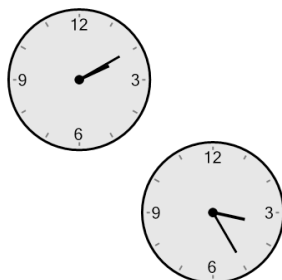


**1** How many hours and minutes later is the second clock?



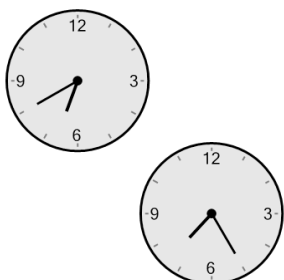
- A 1 hr 40 mins
- B 5 mins
- C 1 hr 50 mins
- D 25 mins
- E 1 hr 10 mins
- F 10 mins

**2** How many hours and minutes later is the second clock?




- A 1 hr 15 mins
- B 15 mins
- C 30 mins
- D 2 hrs
- E 1 hr
- F 1 hr 30 mins

**3** How many hours and minutes later is the second clock?




- A 15 mins
- B 1 hr 15 mins
- C 1 hr
- D 45 mins
- E 1 hr 30 mins
- F 1 hr 45 mins

**4** How many hours and minutes later is the second clock?




- A 1 hr 30 mins
- B 1 hr 45 mins
- C 1 hr
- D 1 hr 15 mins
- E 30 mins
- F 15 mins

**5** How many hours and minutes later is the second clock?




- A 1 hr
- B 1 hr 15 mins
- C 1 hr 30 mins
- D 30 mins
- E 1 hr 45 mins
- F 15 mins

**6** How many hours and minutes later is the second clock?




- A 1 hr 45 mins
- B 45 mins
- C 1 hr 15 mins
- D 15 mins
- E 30 mins
- F 2 hrs 15 mins

**7** How many hours and minutes later is the second clock?



- A 50 mins
- B 5 mins
- C 1 hr 20 mins
- D 35 mins
- E 40 mins
- F 1 hr 5 mins

**8** How many hours and minutes later is the second clock?



- A 3 hrs 10 mins
- B 2 hrs 25 mins
- C 1 hr 25 mins
- D 25 mins
- E 20 mins
- F 2 hrs 10 mins