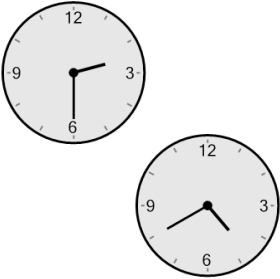


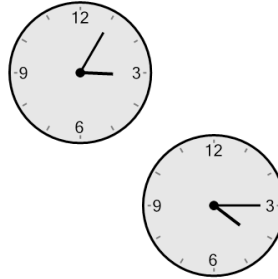
Time - Elapsed - Two Clocks To Hours & Minutes - Five Minutes

1 How many hours and minutes later is the second clock?



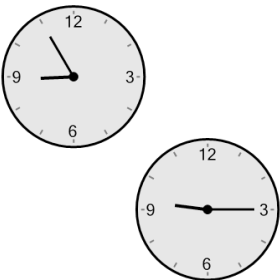
- A 3 hrs 55 mins
- B 2 hrs 55 mins
- C 25 mins
- D 3 hrs 25 mins
- E 2 hrs 10 mins
- F 1 hr 40 mins

2 How many hours and minutes later is the second clock?




- A 35 mins
- B 40 mins
- C 1 hr 25 mins
- D 1 hr 10 mins
- E 2 hrs 40 mins
- F 5 mins

3 How many hours and minutes later is the second clock?



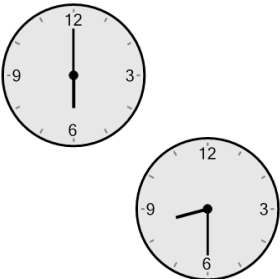
- A 50 mins
- B 35 mins
- C 1 hr 5 mins
- D 1 hr 25 mins
- E 20 mins
- F 2 hrs 5 mins

4 How many hours and minutes later is the second clock?




- A 1 hr 10 mins
- B 1 hr 25 mins
- C 5 mins
- D 40 mins
- E 2 hrs 10 mins
- F 35 mins

5 How many hours and minutes later is the second clock?



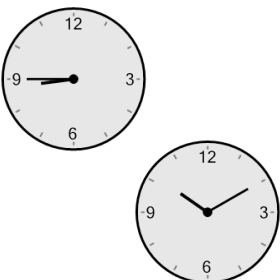
- A 2 hrs 30 mins
- B 4 hrs
- C 2 hrs
- D 3 hrs
- E 3 hrs 45 mins
- F 45 mins

6 How many hours and minutes later is the second clock?




- A 55 mins
- B 1 hr 40 mins
- C 2 hrs 10 mins
- D 2 hrs 25 mins
- E 3 hrs 10 mins
- F 3 hrs 40 mins

7 How many hours and minutes later is the second clock?



- A 1 hr 10 mins
- B 1 hr 25 mins
- C 3 hrs 10 mins
- D 10 mins
- E 2 hrs 25 mins
- F 2 hrs 55 mins

8 How many hours and minutes later is the second clock?



- A 2 hrs 25 mins
- B 3 hrs 25 mins
- C 40 mins
- D 2 hrs 40 mins
- E 2 hrs 55 mins
- F 1 hr 40 mins