




## Time - Elapsed - Two Clocks To Hours & Minutes - Full Hours




**1** How many hours and minutes later is the second clock?



- |   |               |
|---|---------------|
| A | 2 hrs         |
| B | 30 mins       |
| C | 0 hr          |
| D | 2 hrs 45 mins |
| E | 1 hr          |
| F | 15 mins       |

**2** How many hours and minutes later is the second clock?




- |   |               |
|---|---------------|
| A | 3 hrs         |
| B | 2 hrs 45 mins |
| C | 2 hrs 30 mins |
| D | 1 hr          |
| E | 0 hr          |
| F | 15 mins       |

**3** How many hours and minutes later is the second clock?



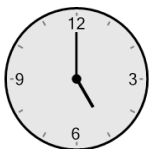

- |   |               |
|---|---------------|
| A | 3 hrs         |
| B | 2 hrs 45 mins |
| C | 45 mins       |
| D | 2 hrs         |
| E | 0 hr          |
| F | 1 hr          |

**4** How many hours and minutes later is the second clock?



- |   |               |
|---|---------------|
| A | 2 hrs 45 mins |
| B | 1 hr 15 mins  |
| C | 1 hr          |
| D | 2 hrs 15 mins |
| E | 0 hr          |
| F | 45 mins       |

**5** How many hours and minutes later is the second clock?



- |   |               |
|---|---------------|
| A | 1 hr          |
| B | 0 hr          |
| C | 2 hrs 45 mins |
| D | 2 hrs         |
| E | 30 mins       |
| F | 1 hr 15 mins  |