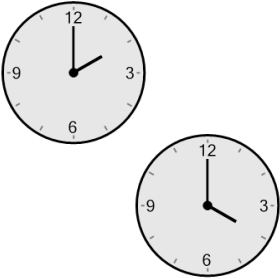


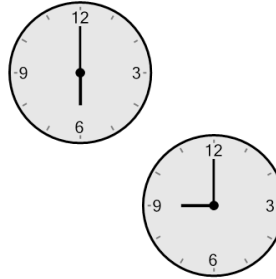
## Time - Elapsed - Two Clocks To Hours & Minutes - Full Hours

**1** How many hours and minutes later is the second clock?



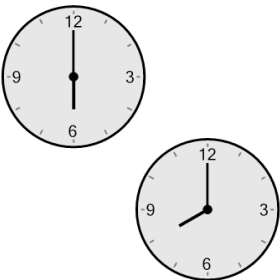
- A 3 hrs 30 mins
- B 4 hrs
- C 3 hrs
- D 2 hrs
- E 30 mins
- F 1 hr

**2** How many hours and minutes later is the second clock?



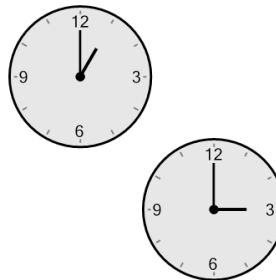
- A 2 hrs
- B 2 hrs 30 mins
- C 3 hrs 15 mins
- D 4 hrs 15 mins
- E 4 hrs
- F 3 hrs

**3** How many hours and minutes later is the second clock?



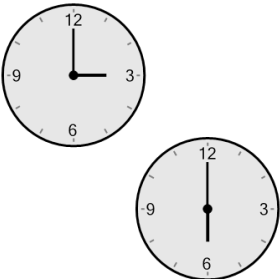
- A 1 hr
- B 2 hrs
- C 15 mins
- D 2 hrs 15 mins
- E 0 hr
- F 1 hr 45 mins

**4** How many hours and minutes later is the second clock?




- A 1 hr
- B 3 hrs
- C 2 hrs
- D 0 hr
- E 1 hr 30 mins
- F 1 hr 15 mins

**5** How many hours and minutes later is the second clock?



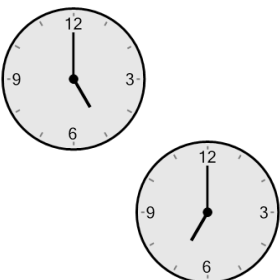
- A 2 hrs
- B 3 hrs
- C 1 hr 45 mins
- D 2 hrs 30 mins
- E 4 hrs
- F 3 hrs 30 mins

**6** How many hours and minutes later is the second clock?




- |           |         |
|-----------|---------|
| A 45 mins | B 3 hrs |
| C 2 hrs   | D 1 hr  |
| E 15 mins | F 0 hr  |

**7** How many hours and minutes later is the second clock?



- A 4 hrs
- B 1 hr 45 mins
- C 0 hr
- D 15 mins
- E 2 hrs
- F 2 hrs 45 mins

**8** How many hours and minutes later is the second clock?



- A 30 mins
- B 2 hrs 15 mins
- C 15 mins
- D 3 hrs
- E 1 hr
- F 0 hr