





## Time - Elapsed - Two Clocks To Hours & Minutes - Full Hours




**1** How many hours and minutes later is the second clock?




- A 0 hr
- B 4 hrs 30 mins
- C 1 hr
- D 4 hrs
- E 3 hrs 15 mins
- F 3 hrs

**2** How many hours and minutes later is the second clock?



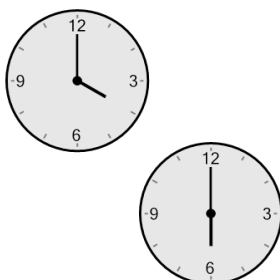
- A 3 hrs 30 mins
- B 1 hr
- C 2 hrs
- D 1 hr 30 mins
- E 2 hrs 30 mins
- F 30 mins

**3** How many hours and minutes later is the second clock?



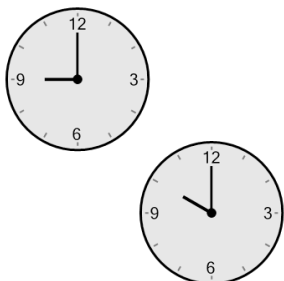
- A 1 hr
- B 2 hrs 15 mins
- C 4 hrs
- D 3 hrs 45 mins
- E 2 hrs
- F 3 hrs

**4** How many hours and minutes later is the second clock?




- A 1 hr
- B 2 hrs 45 mins
- C 2 hrs
- D 3 hrs 45 mins
- E 0 hr
- F 30 mins

**5** How many hours and minutes later is the second clock?




- A 1 hr
- B 15 mins
- C 2 hrs
- D 1 hr 15 mins
- E 30 mins
- F 45 mins

**6** How many hours and minutes later is the second clock?




- A 1 hr
- B 5 hrs
- C 3 hrs 30 mins
- D 2 hrs
- E 2 hrs 15 mins
- F 3 hrs

**7** How many hours and minutes later is the second clock?



- |           |         |
|-----------|---------|
| A 45 mins | B 2 hrs |
| C 4 hrs   | D 0 hr  |
| E 1 hr    | F 3 hrs |

**8** How many hours and minutes later is the second clock?



- A 2 hrs
- B 5 hrs
- C 2 hrs 30 mins
- D 1 hr
- E 3 hrs
- F 1 hr 45 mins