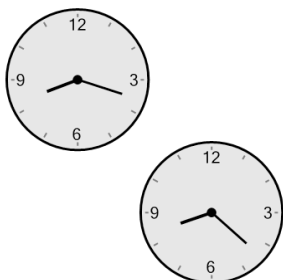



Time - Elapsed - Two Clocks To Hours & Minutes - One Minutes

1 How many hours and minutes later is the second clock?




- A 1 hr 34 mins
- B 11 mins
- C 56 mins
- D 1 hr 49 mins
- E 49 mins
- F 4 mins

2 How many hours and minutes later is the second clock?




- A 1 hr 51 mins
- B 21 mins
- C 2 hrs 6 mins
- D 1 hr 6 mins
- E 51 mins
- F 36 mins

3 How many hours and minutes later is the second clock?




- A 16 mins
- B 1 min
- C 31 mins
- D 1 hr 29 mins
- E 29 mins
- F 59 mins

4 How many hours and minutes later is the second clock?




- A 1 hr 14 mins
- B 31 mins
- C 14 mins
- D 1 hr 59 mins
- E 44 mins
- F 1 hr 16 mins

5 How many hours and minutes later is the second clock?




- A 21 mins
- B 1 hr 21 mins
- C 1 hr 24 mins
- D 51 mins
- E 1 hr 36 mins
- F 36 mins

6 How many hours and minutes later is the second clock?




- A 30 mins
- B 1 hr 30 mins
- C 1 hr 15 mins
- D 0 hr
- E 2 hrs
- F 1 hr

7 How many hours and minutes later is the second clock?



- A 26 mins
- B 1 hr 4 mins
- C 1 hr 34 mins
- D 34 mins
- E 4 mins
- F 1 hr 49 mins

8 How many hours and minutes later is the second clock?



- A 11 mins
- B 4 mins
- C 49 mins
- D 26 mins
- E 41 mins
- F 2 hrs 34 mins