



Time - Elapsed - Two Clocks To Hours & Minutes - One Minutes

1 How many hours and minutes later is the second clock?




- A 22 mins
- B 37 mins
- C 1 hr 23 mins
- D 23 mins
- E 1 hr 37 mins
- F 1 hr 8 mins

2 How many hours and minutes later is the second clock?




- A 6 mins
- B 1 hr 54 mins
- C 24 mins
- D 1 hr 24 mins
- E 1 hr 6 mins
- F 54 mins

3 How many hours and minutes later is the second clock?




- A 3 hrs 5 mins
- B 25 mins
- C 20 mins
- D 2 hrs 35 mins
- E 2 hrs 20 mins
- F 1 hr 20 mins

4 How many hours and minutes later is the second clock?




- A 13 mins
- B 1 hr 28 mins
- C 58 mins
- D 47 mins
- E 2 hrs 13 mins
- F 28 mins

5 How many hours and minutes later is the second clock?




- A 27 mins
- B 1 hr 33 mins
- C 1 hr 12 mins
- D 1 hr 3 mins
- E 33 mins
- F 2 hrs 18 mins

6 How many hours and minutes later is the second clock?



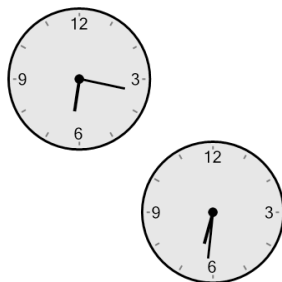
- A 1 hr 39 mins
- B 6 mins
- C 2 hrs 9 mins
- D 54 mins
- E 1 hr 9 mins
- F 1 hr 54 mins

7 How many hours and minutes later is the second clock?



- | | |
|-----------|-----------|
| A 48 mins | B 33 mins |
| C 57 mins | D 27 mins |
| E 42 mins | F 18 mins |

8 How many hours and minutes later is the second clock?



- A 1 min
- B 1 hr 1 min
- C 1 hr 16 mins
- D 14 mins
- E 1 hr 14 mins
- F 1 hr 44 mins