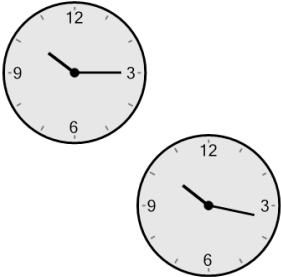


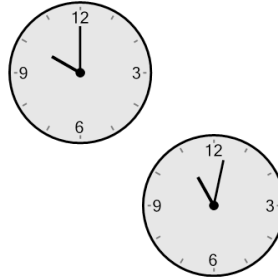
Time - Elapsed - Two Clocks To Hours & Minutes - Quarter Hours

1 How many hours and minutes later is the second clock?



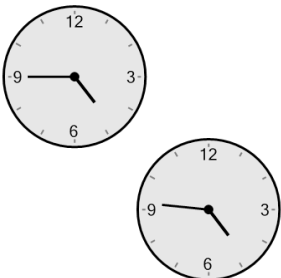
- A 1 hr 43 mins
- B 28 mins
- C 13 mins
- D 1 hr 17 mins
- E 2 mins
- F 17 mins

2 How many hours and minutes later is the second clock?




- A 2 hrs 17 mins
- B 2 hrs 2 mins
- C 17 mins
- D 28 mins
- E 1 hr 2 mins
- F 2 mins

3 How many hours and minutes later is the second clock?



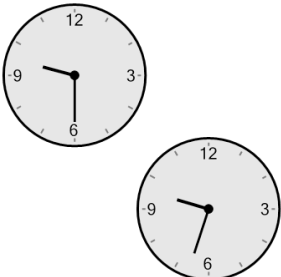
- A 31 mins
- B 59 mins
- C 14 mins
- D 1 min
- E 1 hr 31 mins
- F 1 hr 44 mins

4 How many hours and minutes later is the second clock?




- A 2 mins
- B 13 mins
- C 1 hr 43 mins
- D 1 hr 47 mins
- E 43 mins
- F 1 hr 32 mins

5 How many hours and minutes later is the second clock?



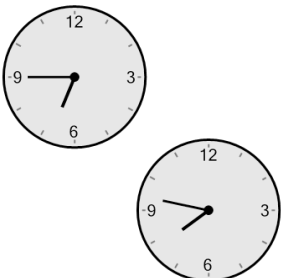
- A 1 hr 27 mins
- B 3 mins
- C 1 hr 33 mins
- D 1 hr 18 mins
- E 1 hr 48 mins
- F 48 mins

6 How many hours and minutes later is the second clock?




- A 1 hr 32 mins
- B 13 mins
- C 47 mins
- D 17 mins
- E 1 hr 43 mins
- F 2 mins

7 How many hours and minutes later is the second clock?



- A 32 mins
- B 2 hrs 2 mins
- C 1 hr 2 mins
- D 2 mins
- E 13 mins
- F 1 hr 17 mins

8 How many hours and minutes later is the second clock?



- A 32 mins
- B 2 mins
- C 2 hrs 47 mins
- D 1 hr 2 mins
- E 1 hr 17 mins
- F 43 mins