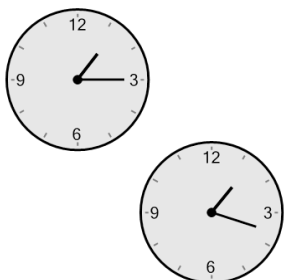





Time - Elapsed - Two Clocks To Hours & Minutes - Quarter Hours

1 How many hours and minutes later is the second clock?



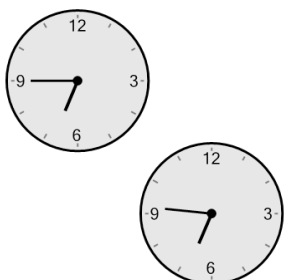
- A 1 hr 27 mins
- B 3 mins
- C 12 mins
- D 1 hr 33 mins
- E 27 mins
- F 42 mins

2 How many hours and minutes later is the second clock?



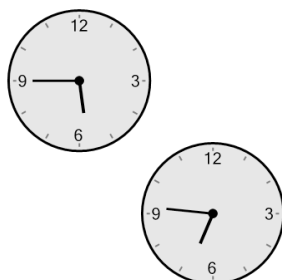
- A 16 mins
- B 46 mins
- C 1 hr 31 mins
- D 31 mins
- E 3 hrs 46 mins
- F 2 hrs 1 min

3 How many hours and minutes later is the second clock?



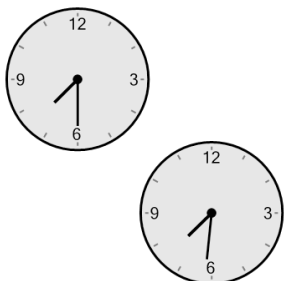
- A 1 hr 14 mins
- B 1 min
- C 14 mins
- D 1 hr 16 mins
- E 1 hr 1 min
- F 1 hr 29 mins

4 How many hours and minutes later is the second clock?



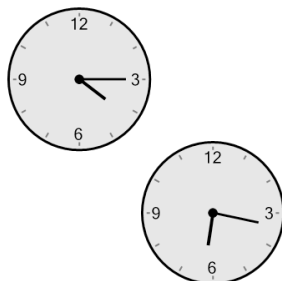
- A 1 hr 31 mins
- B 31 mins
- C 1 hr 16 mins
- D 1 hr 1 min
- E 46 mins
- F 1 hr 46 mins

5 How many hours and minutes later is the second clock?



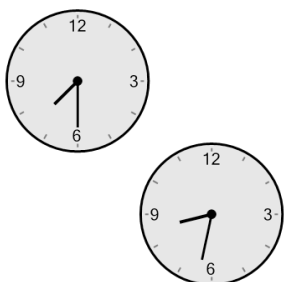
- A 59 mins
- B 14 mins
- C 1 hr 16 mins
- D 1 hr 44 mins
- E 1 min
- F 16 mins

6 How many hours and minutes later is the second clock?




- A 1 hr 2 mins
- B 2 hrs 2 mins
- C 2 hrs 17 mins
- D 1 hr 17 mins
- E 3 hrs 17 mins
- F 1 hr 47 mins

7 How many hours and minutes later is the second clock?



- A 1 hr 47 mins
- B 43 mins
- C 32 mins
- D 1 hr 32 mins
- E 2 hrs 17 mins
- F 1 hr 2 mins

8 How many hours and minutes later is the second clock?



- A 2 hrs 2 mins
- B 1 hr 17 mins
- C 3 hrs 17 mins
- D 2 hrs 17 mins
- E 2 hrs 32 mins
- F 3 hrs 47 mins