



Time - Elapsed - Two Clocks To Minutes - Five Minutes

1 How many minutes later is the second clock?




- | | |
|--------------|---------------|
| A
50 mins | B
85 mins |
| C
10 mins | D
5 mins |
| E
35 mins | F
100 mins |

2 How many minutes later is the second clock?




- | | |
|--------------|---------------|
| A
15 mins | B
105 mins |
| C
45 mins | D
90 mins |
| E
75 mins | F
30 mins |

3 How many minutes later is the second clock?




- | | |
|---------------|--------------|
| A
5 mins | B
95 mins |
| C
115 mins | D
70 mins |
| E
65 mins | F
10 mins |

4 How many minutes later is the second clock?




- | | |
|---------------|--------------|
| A
125 mins | B
85 mins |
| C
65 mins | D
70 mins |
| E
20 mins | F
35 mins |

5 How many minutes later is the second clock?




- | | |
|---------------|--------------|
| A
120 mins | B
0 min |
| C
45 mins | D
30 mins |
| E
90 mins | F
60 mins |

6 How many minutes later is the second clock?




- | | |
|--------------|--------------|
| A
0 min | B
30 mins |
| C
90 mins | D
75 mins |
| E
45 mins | F
15 mins |

7 How many minutes later is the second clock?



- | | |
|--------------|---------------|
| A
65 mins | B
110 mins |
| C
85 mins | D
80 mins |
| E
5 mins | F
20 mins |

8 How many minutes later is the second clock?



- | | |
|--------------|---------------|
| A
50 mins | B
100 mins |
| C
85 mins | D
70 mins |
| E
10 mins | F
40 mins |