





Time - Elapsed - Two Clocks To Minutes - Five Minutes

1 How many minutes later is the second clock?




- | | |
|---------------|---------------|
| A
155 mins | B
10 mins |
| C
95 mins | D
125 mins |
| E
170 mins | F
65 mins |

2 How many minutes later is the second clock?




- | | |
|--------------|---------------|
| A
45 mins | B
60 mins |
| C
90 mins | D
120 mins |
| E
15 mins | F
75 mins |

3 How many minutes later is the second clock?



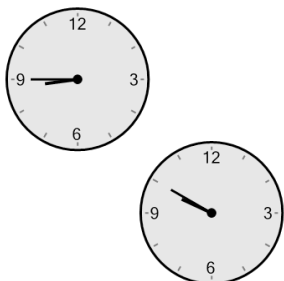
- | | |
|--------------|---------------|
| A
70 mins | B
25 mins |
| C
85 mins | D
145 mins |
| E
10 mins | F
100 mins |

4 How many minutes later is the second clock?




- | | |
|--------------|--------------|
| A
35 mins | B
5 mins |
| C
55 mins | D
20 mins |
| E
50 mins | F
40 mins |

5 How many minutes later is the second clock?



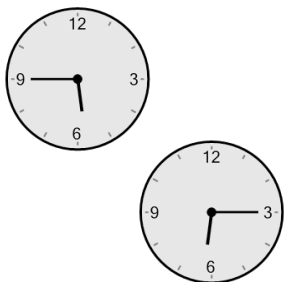
- | | |
|---------------|--------------|
| A
65 mins | B
20 mins |
| C
10 mins | D
40 mins |
| E
170 mins | F
95 mins |

6 How many minutes later is the second clock?




- | | |
|---------------|---------------|
| A
125 mins | B
200 mins |
| C
170 mins | D
95 mins |
| E
65 mins | F
140 mins |

7 How many minutes later is the second clock?



- | | |
|--------------|---------------|
| A
30 mins | B
150 mins |
| C
75 mins | D
105 mins |
| E
60 mins | F
120 mins |

8 How many minutes later is the second clock?



- | | |
|---------------|---------------|
| A
95 mins | B
65 mins |
| C
10 mins | D
140 mins |
| E
110 mins | F
155 mins |