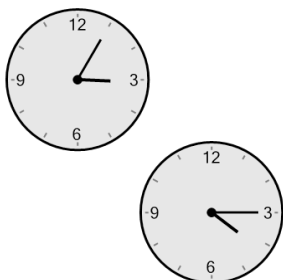





## Time - Elapsed - Two Clocks To Minutes - Five Minutes

**1** How many minutes later is the second clock?




- |               |               |
|---------------|---------------|
| A<br>10 mins  | B<br>55 mins  |
| C<br>70 mins  | D<br>5 mins   |
| E<br>115 mins | F<br>175 mins |

**2** How many minutes later is the second clock?




- |              |              |
|--------------|--------------|
| A<br>10 mins | B<br>95 mins |
| C<br>20 mins | D<br>25 mins |
| E<br>85 mins | F<br>5 mins  |

**3** How many minutes later is the second clock?




- |              |               |
|--------------|---------------|
| A<br>30 mins | B<br>135 mins |
| C<br>45 mins | D<br>60 mins  |
| E<br>15 mins | F<br>105 mins |

**4** How many minutes later is the second clock?



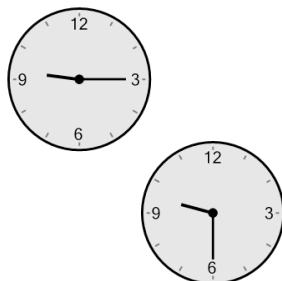
- |              |               |
|--------------|---------------|
| A<br>45 mins | B<br>120 mins |
| C<br>90 mins | D<br>15 mins  |
| E<br>30 mins | F<br>75 mins  |

**5** How many minutes later is the second clock?



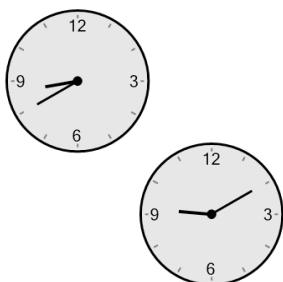
- |               |               |
|---------------|---------------|
| A<br>110 mins | B<br>215 mins |
| C<br>140 mins | D<br>155 mins |
| E<br>35 mins  | F<br>125 mins |

**6** How many minutes later is the second clock?




- |               |              |
|---------------|--------------|
| A<br>0 min    | B<br>60 mins |
| C<br>45 mins  | D<br>15 mins |
| E<br>105 mins | F<br>90 mins |

**7** How many minutes later is the second clock?



- |              |               |
|--------------|---------------|
| A<br>60 mins | B<br>15 mins  |
| C<br>30 mins | D<br>90 mins  |
| E<br>75 mins | F<br>120 mins |

**8** How many minutes later is the second clock?



- |               |               |
|---------------|---------------|
| A<br>75 mins  | B<br>210 mins |
| C<br>105 mins | D<br>165 mins |
| E<br>150 mins | F<br>135 mins |