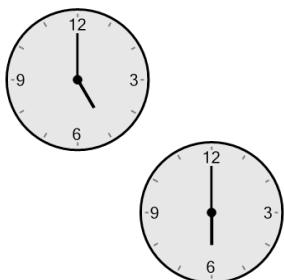



## Time - Elapsed - Two Clocks To Minutes - Full Hours

**1** How many minutes later is the second clock?




- |               |              |
|---------------|--------------|
| A<br>120 mins | B<br>15 mins |
| C<br>180 mins | D<br>60 mins |
| E<br>105 mins | F<br>0 min   |

**2** How many minutes later is the second clock?




- |               |               |
|---------------|---------------|
| A<br>180 mins | B<br>120 mins |
| C<br>0 min    | D<br>45 mins  |
| E<br>60 mins  | F<br>75 mins  |

**3** How many minutes later is the second clock?




- |              |               |
|--------------|---------------|
| A<br>45 mins | B<br>0 min    |
| C<br>30 mins | D<br>180 mins |
| E<br>60 mins | F<br>120 mins |

**4** How many minutes later is the second clock?




- |               |               |
|---------------|---------------|
| A<br>0 min    | B<br>90 mins  |
| C<br>120 mins | D<br>60 mins  |
| E<br>30 mins  | F<br>180 mins |

**5** How many minutes later is the second clock?




- |              |               |
|--------------|---------------|
| A<br>45 mins | B<br>75 mins  |
| C<br>60 mins | D<br>165 mins |
| E<br>30 mins | F<br>90 mins  |

**6** How many minutes later is the second clock?



- |               |               |
|---------------|---------------|
| A<br>120 mins | B<br>180 mins |
| C<br>60 mins  | D<br>75 mins  |
| E<br>0 min    | F<br>135 mins |

**7** How many minutes later is the second clock?



- |               |              |
|---------------|--------------|
| A<br>45 mins  | B<br>60 mins |
| C<br>75 mins  | D<br>15 mins |
| E<br>120 mins | F<br>0 min   |