





## Time - Elapsed - Two Clocks To Minutes - Full Hours




**1** How many minutes later is the second clock?




A	225 mins	B	120 mins
C	0 min	D	240 mins
E	60 mins	F	165 mins

**2** How many minutes later is the second clock?




A	120 mins	B	15 mins
C	135 mins	D	30 mins
E	180 mins	F	60 mins

**3** How many minutes later is the second clock?



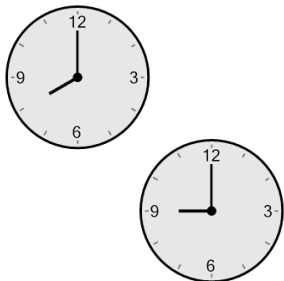
A	240 mins	B	105 mins
C	180 mins	D	120 mins
E	60 mins	F	0 min

**4** How many minutes later is the second clock?




A	75 mins	B	105 mins
C	120 mins	D	0 min
E	60 mins	F	180 mins

**5** How many minutes later is the second clock?




A	120 mins	B	135 mins
C	60 mins	D	180 mins
E	15 mins	F	0 min

**6** How many minutes later is the second clock?




A	180 mins	B	270 mins
C	60 mins	D	255 mins
E	300 mins	F	75 mins

**7** How many minutes later is the second clock?



A	225 mins	B	60 mins
C	180 mins	D	0 min
E	30 mins	F	120 mins

**8** How many minutes later is the second clock?



A	240 mins	B	120 mins
C	180 mins	D	135 mins
E	60 mins	F	225 mins