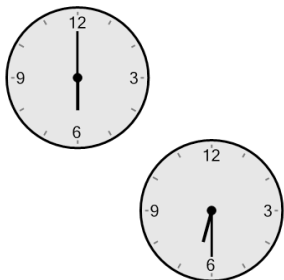




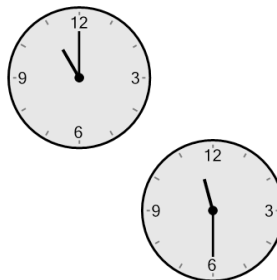
Time - Elapsed - Two Clocks To Minutes - Half Hours

1 How many minutes later is the second clock?



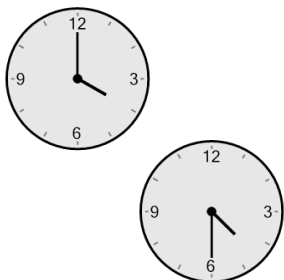
- | | |
|---------------|---------------|
| A
30 mins | B
135 mins |
| C
120 mins | D
60 mins |
| E
90 mins | F
0 min |

2 How many minutes later is the second clock?




- | | |
|---------------|--------------|
| A
105 mins | B
30 mins |
| C
15 mins | D
60 mins |
| E
150 mins | F
0 min |

3 How many minutes later is the second clock?




- | | |
|---------------|---------------|
| A
60 mins | B
120 mins |
| C
30 mins | D
90 mins |
| E
135 mins | F
75 mins |

4 How many minutes later is the second clock?



- | | |
|--------------|---------------|
| A
30 mins | B
45 mins |
| C
0 min | D
60 mins |
| E
90 mins | F
120 mins |

5 How many minutes later is the second clock?



- | | |
|---------------|--------------|
| A
120 mins | B
0 min |
| C
30 mins | D
45 mins |
| E
150 mins | F
90 mins |