
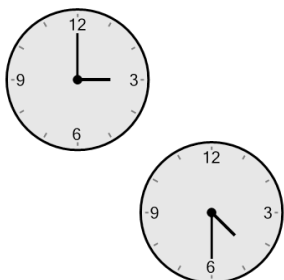




Time - Elapsed - Two Clocks To Minutes - Half Hours




1 How many minutes later is the second clock?



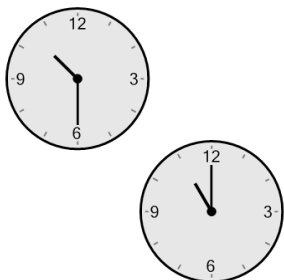
- | | |
|---------------|---------------|
| A
135 mins | B
45 mins |
| C
90 mins | D
60 mins |
| E
195 mins | F
210 mins |

2 How many minutes later is the second clock?




- | | |
|--------------|---------------|
| A
60 mins | B
120 mins |
| C
0 min | D
45 mins |
| E
15 mins | F
180 mins |

3 How many minutes later is the second clock?



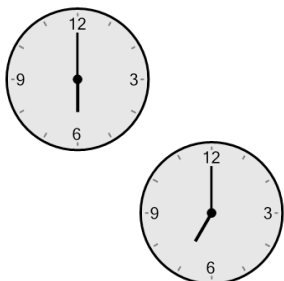
- | | |
|---------------|---------------|
| A
45 mins | B
105 mins |
| C
30 mins | D
75 mins |
| E
120 mins | F
15 mins |

4 How many minutes later is the second clock?




- | | |
|---------------|--------------|
| A
90 mins | B
30 mins |
| C
135 mins | D
15 mins |
| E
0 min | F
75 mins |

5 How many minutes later is the second clock?



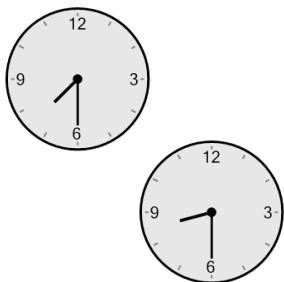
- | | |
|---------------|---------------|
| A
120 mins | B
150 mins |
| C
60 mins | D
0 min |
| E
15 mins | F
105 mins |

6 How many minutes later is the second clock?




- | | |
|---------------|---------------|
| A
150 mins | B
75 mins |
| C
90 mins | D
120 mins |
| E
60 mins | F
30 mins |

7 How many minutes later is the second clock?



- | | |
|---------------|--------------|
| A
105 mins | B
60 mins |
| C
120 mins | D
0 min |
| E
45 mins | F
30 mins |

8 How many minutes later is the second clock?



- | | |
|---------------|---------------|
| A
120 mins | B
180 mins |
| C
30 mins | D
15 mins |
| E
60 mins | F
90 mins |