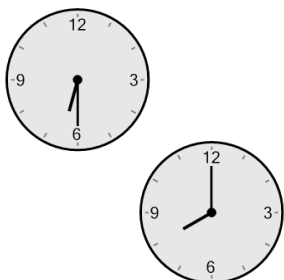



## Time - Elapsed - Two Clocks To Minutes - Half Hours

**1** How many minutes later is the second clock?




- |               |              |
|---------------|--------------|
| A<br>90 mins  | B<br>75 mins |
| C<br>120 mins | D<br>60 mins |
| E<br>165 mins | F<br>45 mins |

**2** How many minutes later is the second clock?




- |               |               |
|---------------|---------------|
| A<br>60 mins  | B<br>45 mins  |
| C<br>240 mins | D<br>210 mins |
| E<br>0 min    | F<br>120 mins |

**3** How many minutes later is the second clock?



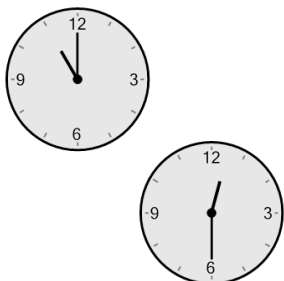
- |               |               |
|---------------|---------------|
| A<br>90 mins  | B<br>0 min    |
| C<br>150 mins | D<br>180 mins |
| E<br>60 mins  | F<br>75 mins  |

**4** How many minutes later is the second clock?




- |               |               |
|---------------|---------------|
| A<br>30 mins  | B<br>105 mins |
| C<br>45 mins  | D<br>60 mins  |
| E<br>120 mins | F<br>0 min    |

**5** How many minutes later is the second clock?




- |               |              |
|---------------|--------------|
| A<br>210 mins | B<br>30 mins |
| C<br>165 mins | D<br>90 mins |
| E<br>135 mins | F<br>45 mins |

**6** How many minutes later is the second clock?




- |               |               |
|---------------|---------------|
| A<br>60 mins  | B<br>30 mins  |
| C<br>90 mins  | D<br>120 mins |
| E<br>135 mins | F<br>180 mins |

**7** How many minutes later is the second clock?



- |               |               |
|---------------|---------------|
| A<br>180 mins | B<br>120 mins |
| C<br>15 mins  | D<br>30 mins  |
| E<br>45 mins  | F<br>60 mins  |

**8** How many minutes later is the second clock?



- |               |               |
|---------------|---------------|
| A<br>30 mins  | B<br>165 mins |
| C<br>120 mins | D<br>240 mins |
| E<br>150 mins | F<br>210 mins |