



Time - Elapsed - Two Clocks To Minutes - One Minutes

1 How many minutes later is the second clock?




- | | |
|---------------|---------------|
| A
28 mins | B
133 mins |
| C
103 mins | D
2 mins |
| E
118 mins | F
17 mins |

2 How many minutes later is the second clock?




- | | |
|--------------|---------------|
| A
89 mins | B
104 mins |
| C
16 mins | D
29 mins |
| E
61 mins | F
14 mins |

3 How many minutes later is the second clock?



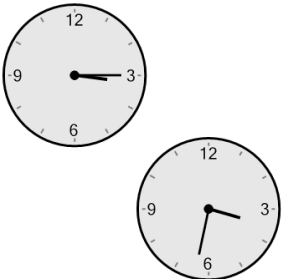
- | | |
|--------------|---------------|
| A
35 mins | B
80 mins |
| C
70 mins | D
125 mins |
| E
20 mins | F
140 mins |

4 How many minutes later is the second clock?




- | | |
|---------------|--------------|
| A
144 mins | B
54 mins |
| C
36 mins | D
51 mins |
| E
24 mins | F
39 mins |

5 How many minutes later is the second clock?



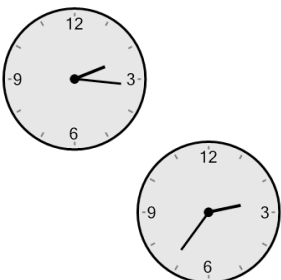
- | | |
|--------------|---------------|
| A
17 mins | B
13 mins |
| C
47 mins | D
107 mins |
| E
32 mins | F
62 mins |

6 How many minutes later is the second clock?




- | | |
|--------------|--------------|
| A
55 mins | B
20 mins |
| C
40 mins | D
95 mins |
| E
65 mins | F
10 mins |

7 How many minutes later is the second clock?



- | | |
|--------------|---------------|
| A
40 mins | B
20 mins |
| C
35 mins | D
5 mins |
| E
80 mins | F
125 mins |

8 How many minutes later is the second clock?



- | | |
|---------------|---------------|
| A
21 mins | B
159 mins |
| C
144 mins | D
6 mins |
| E
51 mins | F
54 mins |