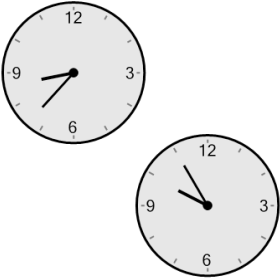



Time - Elapsed - Two Clocks To Minutes - One Minutes

1 How many minutes later is the second clock?




- | | |
|---------------|--------------|
| A 3 mins | B 48 mins |
| C 153 mins | D 27 mins |
| E 33 mins | F 78 mins |

2 How many minutes later is the second clock?




- | | |
|--------------|---------------|
| A 14 mins | B 136 mins |
| C 29 mins | D 151 mins |
| E 46 mins | F 31 mins |

3 How many minutes later is the second clock?




- | | |
|---------------|---------------|
| A 124 mins | B 79 mins |
| C 154 mins | D 109 mins |
| E 64 mins | F 49 mins |

4 How many minutes later is the second clock?




- | | |
|--------------|--------------|
| A 24 mins | B 69 mins |
| C 21 mins | D 84 mins |
| E 99 mins | F 6 mins |

5 How many minutes later is the second clock?



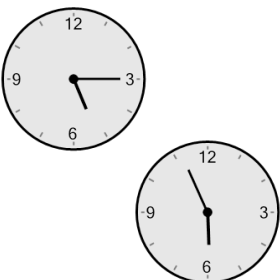
- | | |
|---------------|---------------|
| A 45 mins | B 120 mins |
| C 105 mins | D 150 mins |
| E 30 mins | F 0 min |

6 How many minutes later is the second clock?




- | | |
|--------------|---------------|
| A 29 mins | B 61 mins |
| C 46 mins | D 119 mins |
| E 14 mins | F 31 mins |

7 How many minutes later is the second clock?



- | | |
|---------------|--------------|
| A 49 mins | B 34 mins |
| C 71 mins | D 41 mins |
| E 116 mins | F 4 mins |

8 How many minutes later is the second clock?



- | | |
|---------------|---------------|
| A 128 mins | B 143 mins |
| C 113 mins | D 98 mins |
| E 83 mins | F 158 mins |