


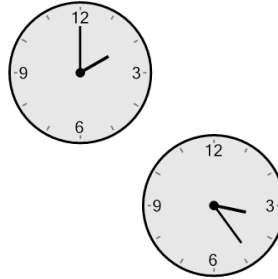
## Time - Elapsed - Two Clocks To Minutes - One Minutes

**1** How many minutes later is the second clock?




- |              |               |
|--------------|---------------|
| A<br>35 mins | B<br>155 mins |
| C<br>5 mins  | D<br>25 mins  |
| E<br>65 mins | F<br>50 mins  |

**2** How many minutes later is the second clock?




- |               |               |
|---------------|---------------|
| A<br>129 mins | B<br>84 mins  |
| C<br>24 mins  | D<br>189 mins |
| E<br>6 mins   | F<br>69 mins  |

**3** How many minutes later is the second clock?



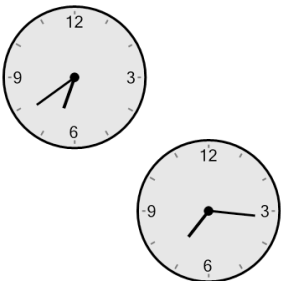
- |               |              |
|---------------|--------------|
| A<br>85 mins  | B<br>35 mins |
| C<br>115 mins | D<br>10 mins |
| E<br>40 mins  | F<br>5 mins  |

**4** How many minutes later is the second clock?




- |               |              |
|---------------|--------------|
| A<br>26 mins  | B<br>64 mins |
| C<br>101 mins | D<br>4 mins  |
| E<br>34 mins  | F<br>79 mins |

**5** How many minutes later is the second clock?



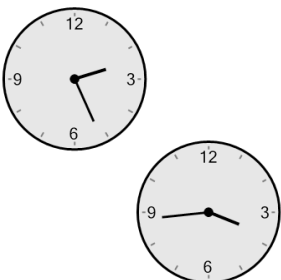
- |               |              |
|---------------|--------------|
| A<br>127 mins | B<br>38 mins |
| C<br>8 mins   | D<br>23 mins |
| E<br>22 mins  | F<br>37 mins |

**6** How many minutes later is the second clock?




- |               |               |
|---------------|---------------|
| A<br>2 mins   | B<br>178 mins |
| C<br>28 mins  | D<br>88 mins  |
| E<br>118 mins | F<br>13 mins  |

**7** How many minutes later is the second clock?



- |               |               |
|---------------|---------------|
| A<br>123 mins | B<br>108 mins |
| C<br>138 mins | D<br>3 mins   |
| E<br>93 mins  | F<br>78 mins  |

**8** How many minutes later is the second clock?



- |              |              |
|--------------|--------------|
| A<br>36 mins | B<br>24 mins |
| C<br>99 mins | D<br>9 mins  |
| E<br>39 mins | F<br>6 mins  |